


Let's Go Shopping!

HOME APPLIANCES STORE


£65.92



£13.99



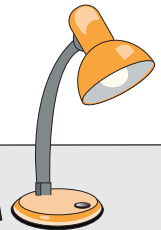
£16.75



£24.13



£12.84



PREVIEW

Gain complete access to the largest collection of worksheets in all subjects!

Members, please log in to download this worksheet.

Not a member? Please sign up to gain complete access.

www.mathworksheets4kids.com

1) Mark buys a hair dryer.
What is the price of the hair dryer?
How much change did he receive?

£30.00

2) Rose buys a set of plates.
What is the price of the set of plates?
How much change did she receive?

£15.00

3) Jessica buys an iron. She pays the cashier £35.00.
What is the price of the iron?
How much change did she receive?

£35.00

4) Thomas buys a toaster. He pays the cashier £40.00.
What is the price of the toaster?
How much change did he receive?

£40.00

5) Amy buys a blender. She pays the cashier £70.00.
What is the price of the blender?
How much change did she receive?

£70.00

Let's Go Shopping!

HOME APPLIANCES STORE

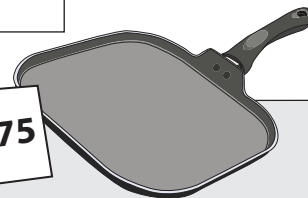


£65.92


£13.99



£16.75



£24.13



£12.84

PREVIEW

Gain complete access to the largest collection of worksheets in all subjects!

Members, please log in to download this worksheet.

Not a member? Please sign up to gain complete access.

www.mathworksheets4kids.com

1) Mark buys a hair dryer.
What is the price of the hair dryer?
How much change did he receive?

£30.00

£24.13

£5.87

2) Rose buys a set of plates.
What is the price of the plates?
How much change did she receive?

£15.00

£13.99

£1.01

3) Jessica buys an iron. She pays the cashier £35.00.
What is the price of the iron?
How much change did she receive?

£35.00

£34.00

£1.00

4) Thomas buys a toaster. He pays the cashier £40.00.
What is the price of the toaster?
How much change did he receive?

£40.00

£36.65

£3.35

5) Amy buys a blender. She pays the cashier £70.00.
What is the price of the blender?
How much change did she receive?

£70.00

£65.92

£4.08