

Let's Go Shopping!

ELECTRONICS STORE


£179.99



£14.00



£54.30




£198.19



£109.75



2



PREVIEW

Gain complete access to the largest collection of worksheets in all subjects!

Members, please log in to download this worksheet.

Not a member? Please sign up to gain complete access.

www.mathworksheets4kids.com

1) Emma buys a mobile phone. What is her change?

2) Jacob buys a laptop. What is his change?

3) Mia buys a calculator. What is her change?

4) James buys a speaker and a mobile phone. He pays £155.00. What is his change?

5) William buys a television and a pen drive. He pays £200.00. What is his change?

6) Ethan buys a mobile phone, a pen drive and a laptop. He pays £322.00. What is his change?

Name : _____

Let's Go Shopping!

ELECTRONICS STORE


£179.99



£14.00



£54.30



£198.19



£109.75



2



PREVIEW

Gain complete access to the largest collection of worksheets in all subjects!

Members, please log in to download this worksheet.

Not a member? Please sign up to gain complete access.

www.mathworksheets4kids.com

1) Emma buys a mobile phone. What is her change?

£17.23

2) Jacob buys a laptop. What is his change?

£2.51

3) Mia buys a calculator. What is her change?

£2.00

4) James buys a speaker and a mobile phone. He pays £200.00. What is his change?

£4.57

5) William buys a television and a pen drive. He pays £200.00. What is his change?

£6.01

6) Ethan buys a mobile phone, a pen drive and a laptop. He pays £322.00. What is his change?

£0.06