



It's Time for Change

1) You bought  for £17.13.


You paid  .

You got back _____.

2) You bought  for £8.99.

You paid  .

You got back _____.

3) You bought  for £3.00.

You paid _____.

You got back _____.


PREVIEW

Gain complete access to the largest collection of worksheets in all subjects!


Members, please log in to download this worksheet.

Not a member? Please sign up to gain complete access.

www.mathworksheets4kids.com


You paid  .

You got back _____.

5) You bought  for £8.83.

You paid _____.

You got back _____.

You paid  .

You got back _____.

7) Kevin buys an alarm clock at the mall. The price of the alarm clock is £17.75. How much change does he receive, if Kevin pays for the clock with a twenty-pound note?

8) Juan has saved up £50.00. If he buys a bicycle for £49.00, how much money is left with Juan?

Name : _____


It's Time for Change


1) You bought  for £17.13.

You paid  .

You got back _____.


£2.87

2) You bought  for £8.99.

You paid  .

You got back _____.

£1.01

3) You bought  for £3.00.

You paid _____.

You got back _____.


PREVIEW

Gain complete access to the largest collection of worksheets in all subjects!

Members, please log in to download this worksheet.


Not a member? Please sign up to gain complete access.

www.mathworksheets4kids.com

You paid  .


You got back _____.

£5.75

5) You bought  for £8.83.

You paid _____.

You got back _____.

You paid  .

You got back _____.

£2.97

7) Kevin buys an alarm clock at the mall. The price of the alarm clock is £17.76. How much change does he receive, if Kevin pays for the clock with a twenty-pound note?

£2.24

8) Juan has saved up £50.00. If he buys a bicycle for £49.00, how much money is left with Juan?

£1.00