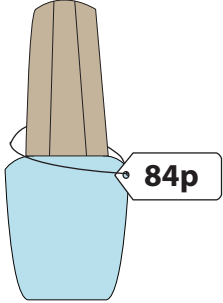
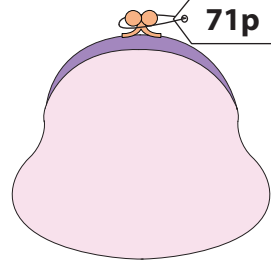


What is Your Change?

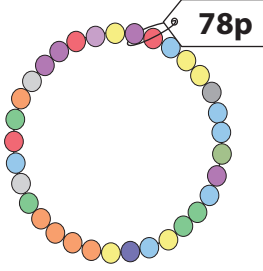
You pay £1 for each item. Show the change you receive, with minimum number of coins.


1)  **84p**


_____ 50 pence coins
 _____ 10 pence coins
 _____ 5 pence coins
 _____ 1 penny coins

2)  **71p**

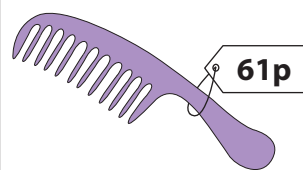
_____ 20 pence coins
 _____ 10 pence coins
 _____ 2 pence coins
 _____ 1 penny coins

3)  **78p**

5)  **86p**

7)  **59p**

_____ 50 pence coins
 _____ 10 pence coins
 _____ 2 pence coins
 _____ 1 penny coins

8)  **61p**

_____ 20 pence coins
 _____ 10 pence coins
 _____ 5 pence coins
 _____ 1 penny coins

PREVIEW

Gain complete access to the largest collection of worksheets in all subjects!

Members, please log in to download this worksheet.

Not a member? Please sign up to gain complete access.

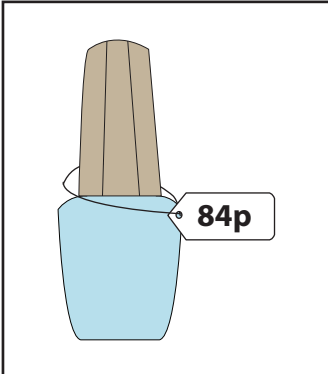
www.mathworksheets4kids.com

_____ 50 pence coins
 _____ 5 pence coins
 _____ 2 pence coins
 _____ 1 penny coins

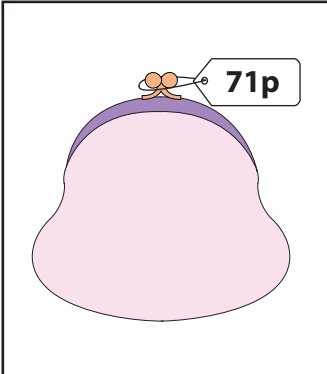
_____ 50 pence coins
 _____ 20 pence coins
 _____ 5 pence coins
 _____ 1 penny coins

What is Your Change?

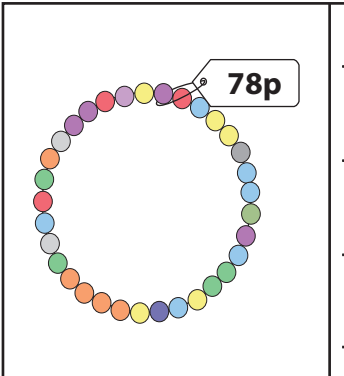
You pay £1 for each item. Show the change you receive, with minimum number of coins.

1)  **84p**

 0 50 pence coins
 1 10 pence coins
 1 5 pence coins
 1 1 penny coins

2)  **71p**

 1 20 pence coins
 0 10 pence coins
 4 2 pence coins
 1 1 penny coins

3)  **78p**

PREVIEW

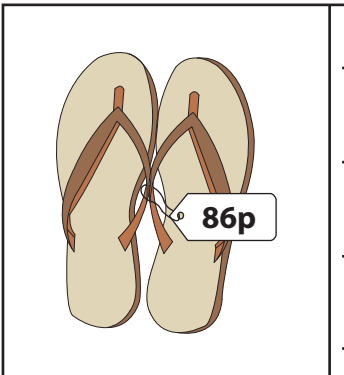
Gain complete access to the largest collection of worksheets in all subjects!

Members, please log in to download this worksheet.

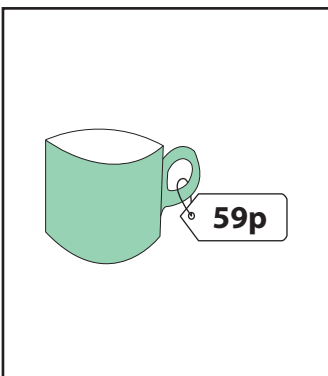
Not a member? Please sign up to gain complete access.

www.mathworksheets4kids.com

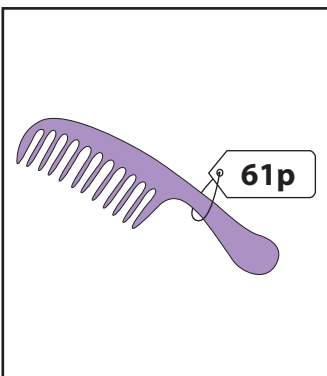
 1 50 pence coins
 2 5 pence coins
 2 2 pence coins
 0 1 penny coins

5)  **86p**

 1 50 pence coins
 0 20 pence coins
 1 5 pence coins
 1 1 penny coins

7)  **59p**

 0 50 pence coins
 4 10 pence coins
 0 2 pence coins
 1 1 penny coins

8)  **61p**

 1 20 pence coins
 1 10 pence coins
 1 5 pence coins
 4 1 penny coins