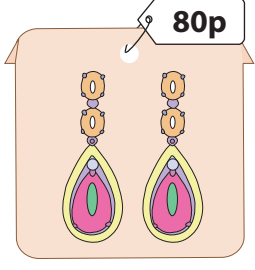
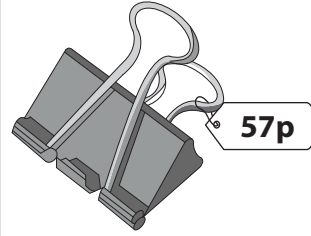



# What is Your Change?

You pay £1 for each item. Show the change you receive, with minimum number of coins.

1)  \_\_\_\_\_ 50 pence coins  
\_\_\_\_\_ 10 pence coins  
\_\_\_\_\_ 5 pence coins  
\_\_\_\_\_ 1 penny coins

2)  \_\_\_\_\_ 20 pence coins  
\_\_\_\_\_ 10 pence coins  
\_\_\_\_\_ 2 pence coins  
\_\_\_\_\_ 1 penny coins

3) 

## PREVIEW

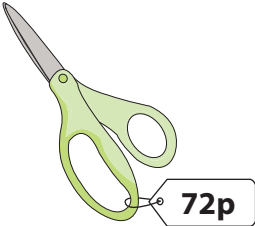
Gain complete access to the largest collection of worksheets in all subjects!

Members, please log in to download this worksheet.

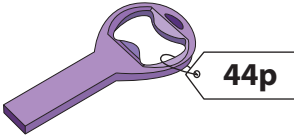
Not a member? Please sign up to gain complete access.

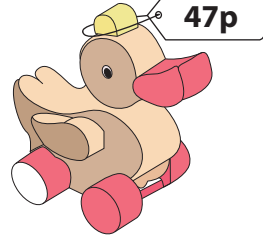
[www.mathworksheets4kids.com](http://www.mathworksheets4kids.com)

\_\_\_\_\_ 50 pence coins  
 \_\_\_\_\_ 10 pence coins  
 \_\_\_\_\_ 2 pence coins  
 \_\_\_\_\_ 1 penny coins

5) 

\_\_\_\_\_ 20 pence coins  
 \_\_\_\_\_ 10 pence coins  
 \_\_\_\_\_ 2 pence coins  
 \_\_\_\_\_ 1 penny coins

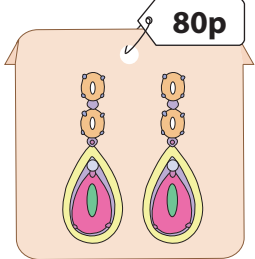
7)  \_\_\_\_\_ 50 pence coins  
\_\_\_\_\_ 5 pence coins  
\_\_\_\_\_ 2 pence coins  
\_\_\_\_\_ 1 penny coins

8)  \_\_\_\_\_ 50 pence coins  
\_\_\_\_\_ 10 pence coins  
\_\_\_\_\_ 2 pence coins  
\_\_\_\_\_ 1 penny coins

## What is Your Change?

You pay £1 for each item. Show the change you receive, with minimum number of coins.

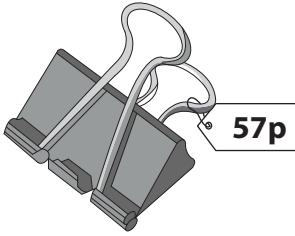
1)



**80p**

  0   50 pence coins  
  2   10 pence coins  
  0   5 pence coins  
  0   1 penny coins


2)



**57p**

  2   20 pence coins  
  0   10 pence coins  
  1   2 pence coins  
  1   1 penny coins

3)



**63p**

# PREVIEW

Gain complete access to the largest collection of worksheets in all subjects!

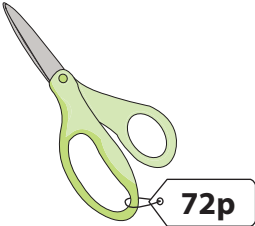
Members, please log in to download this worksheet.

Not a member? Please sign up to gain complete access.

[www.mathworksheets4kids.com](http://www.mathworksheets4kids.com)

  1   50 pence coins  
  3   10 pence coins  
  2   2 pence coins  
  1   1 penny coins

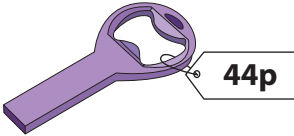
5)



**72p**

  0   20 pence coins  
  0   10 pence coins  
  2   2 pence coins  
  0   1 penny coins

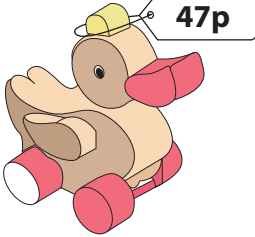
7)



**44p**

  1   50 pence coins  
  1   5 pence coins  
  0   2 pence coins  
  1   1 penny coins

8)



**47p**

  1   50 pence coins  
  0   10 pence coins  
  1   2 pence coins  
  1   1 penny coins