

Making Change

Calculate the change for each set of items you buy.

					
\$13.50	\$11.32	\$6.84	\$14.96	\$3.70	\$8.20

1)  + 

2) 5  + 

3) 7  + 4

4) 3  + 8

5)  + 6 

6) 4  + 2 

PREVIEW

Gain complete access to the largest collection of worksheets in all subjects!

Members, please log in to download this worksheet.



Not a member? Please sign up to gain complete access.



www.mathworksheets4kids.com

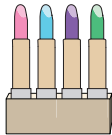
Making Change

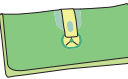
Calculate the change for each set of items you buy.


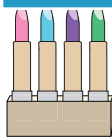
					
\$13.50	\$11.32	\$6.84	\$14.96	\$3.70	\$8.20



1)  + 

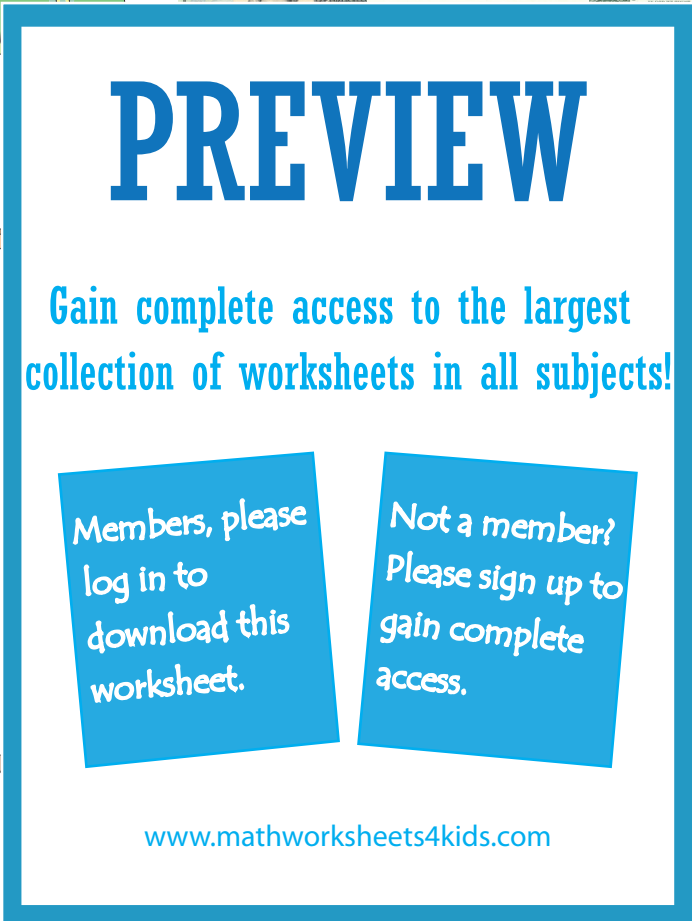
2) 5  + 


3) 7  + 4


4) 3  + 8


5)  + 6 


6) 4  + 2 





 _____ **\$0.20**

 _____ **\$0.50**

 _____ **\$5.96**

 _____ **\$13.88**

 _____ **\$3.38**

 _____ **\$16.08**