










Making Change


Calculate the change for each set of items you buy.

					
\$14.92	\$2.32	\$1.94	\$15.69	\$45.07	\$2.26



1)  + 7  _____

2) 4  + 5 _____

3) 9  + 3 _____

4) 6  + _____

5) 2  + 8  _____

6)  +  _____

PREVIEW

Gain complete access to the largest collection of worksheets in all subjects!


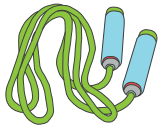




Members, please log in to download this worksheet.

Not a member? Please sign up to gain complete access.

www.mathworksheets4kids.com

Making Change

Calculate the change for each set of items you buy.

					
\$14.92	\$2.32	\$1.94	\$15.69	\$45.07	\$2.26

1)  + 7 

2)  + 5

3)  + 3

4)  +

5)  + 8 

6)  + 



 
\$0.11


\$12.64


\$8.76


\$13.29

 
\$0.84

 
\$2.05