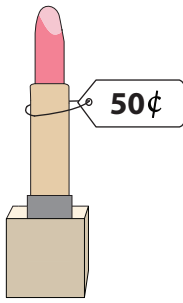




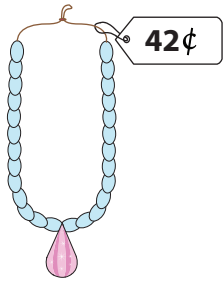
What is Your Change?

You pay \$1 for each item. Show the change you receive, with minimum number of coins.

1)  _____ quarters
 _____ dimes
 _____ nickels
 _____ pennies

2)  _____ quarters
 _____ dimes
 _____ nickels
 _____ pennies

3)  _____ quarters
 _____ dimes
 _____ nickels
 _____ pennies

5)  _____ quarters
 _____ dimes
 _____ nickels
 _____ pennies

PREVIEW

Gain complete access to the largest collection of worksheets in all subjects!

Members, please log in to download this worksheet.

Not a member? Please sign up to gain complete access.

www.mathworksheets4kids.com

_____ quarters
 _____ dimes
 _____ nickels
 _____ pennies

_____ quarters
 _____ dimes
 _____ nickels
 _____ pennies

7) You pay with \$1 for a coin purse that costs 70¢. Write your change in minimum number of coins.

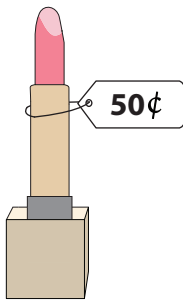
_____ quarters ; _____ dimes ; _____ nickels


8) You pay with \$1 for a hair band that costs 87¢. Write your change in minimum number of coins.


_____ quarters ; _____ dimes ; _____ pennies

What is Your Change?

You pay \$1 for each item. Show the change you receive, with minimum number of coins.

1)  quarters
 dimes
 nickels
 pennies

2)  quarters
 dimes
 nickels
 pennies

3)  quarters
 dimes
 nickels
 pennies

PREVIEW

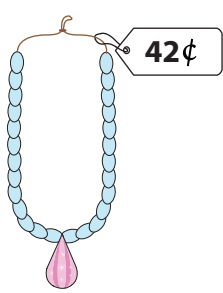
Gain complete access to the largest collection of worksheets in all subjects!

Members, please log in to download this worksheet.

Not a member? Please sign up to gain complete access.

www.mathworksheets4kids.com

quarters
 dimes
 nickels
 pennies

5)  quarters
 dimes
 nickels
 pennies

quarters
 dimes
 nickels
 pennies

7) You pay with \$1 for a coin purse that costs 70¢. Write your change in minimum number of coins.

quarters ; dimes ; nickels

8) You pay with \$1 for a hair band that costs 87¢. Write your change in minimum number of coins.

quarters ; dimes ; pennies