
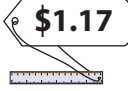

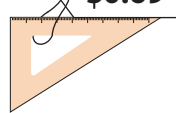

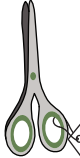






Figure out the Change!




1) Jerry has  . He buys a  \$1.17 , a  \$4.95 and a  \$0.69 .




What is his change?

2) Judy has  . She buys a  \$2.85 and a  \$3.39 . How much change does she get?


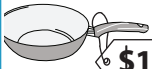
3) Peter has  . He buys a  \$24.58 and a  .

change does he get?

4) _____ has  . He buys a  \$38.46 and a  \$8.55 .

5) Rose has  . She buys a  \$1.20 and a  .

change?

6) _____ has  . She buys a  \$10.69 . How much change does she get?

PREVIEW

Gain complete access to the largest collection of worksheets in all subjects!

Members, please log in to download this worksheet.

Not a member? Please sign up to gain complete access.


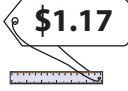

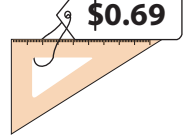
www.mathworksheets4kids.com




7) Mom bought a bunch of bananas priced at \$1.42, half a gallon of milk costing \$0.95 and an ice cream tub worth \$2.24 to make banana milkshake. She made the payment with a five-dollar bill. How much change did Mom receive?




8) Alex bought a bundle of office sheets, a pack of push pins and sticky notes for his new firm. The items cost him \$36.78, \$1.25 and \$4.97 respectively. He handed the supplier a fifty-dollar bill. How much did Alex receive in change?




Name : _____




Figure out the Change!


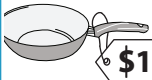
1) Jerry has  . He buys a  \$1.17 , a  \$4.95 and a  \$0.69 .
What is his change?
_____ **\$13.19**

2) Judy has  . She buys a  \$2.85 and a  \$3.39 . How much change does she get?
_____ **\$3.76**

3) Peter has  . He buys a  \$24.58 and a  .
change does he get?
_____ **\$5.42**

4) _____ has  . He buys a  \$38.46 and a  \$8.55 .
change does he get?
_____ **\$3.82**

5) Rose has  . She buys a  \$1.20 and a  .
change?
_____ **\$0.80**

6) _____ has  . She buys a  \$10.69 . How much change does she get?
_____ **\$1.24**

PREVIEW

Gain complete access to the largest collection of worksheets in all subjects!

Members, please log in to download this worksheet.

Not a member? Please sign up to gain complete access.

www.mathworksheets4kids.com

7) Mom bought a bunch of bananas priced at \$1.42, half a gallon of milk costing \$0.95 and an ice cream tub worth \$2.24 to make banana milkshake. She made the payment with a five-dollar bill. How much change did Mom receive?
_____ **\$0.39**

8) Alex bought a bundle of office sheets, a pack of push pins and sticky notes for his new firm. The items cost him \$36.78, \$1.25 and \$4.97 respectively. He handed the supplier a fifty-dollar bill. How much did Alex receive in change?
_____ **\$7.00**