



Name : _____


It's Time for Change


Sheet 2

1) You bought  for \$5.59.

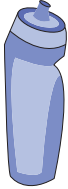
You paid  .

You got back _____

2) You bought  for \$14.32.

You paid  .

You got back _____

3) You bought  for \$17.21.

You paid _____

You got back _____


PREVIEW

Gain complete access to the largest collection of worksheets in all subjects!


Members, please log in to download this worksheet.

Not a member? Please sign up to gain complete access.

www.mathworksheets4kids.com


4) You paid  .

You got back _____

5) You bought  for \$49.99.

You paid _____

You got back _____

6) You paid  .

You got back _____


7) Kevin buys an alarm clock that costs \$17.75 and pays with a twenty dollar bill. How much change did he receive?

8) Mr. Anderson went to the store to buy Juan a bike. The bike cost \$89.00, and he made the payment with a hundred-dollar bill. How much change was given to Mr. Anderson?

Name : _____


It's Time for Change


1) You bought  for \$5.59.

You paid  .

You got back _____

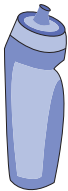
\$4.41

2) You bought  for \$14.32.

You paid  .

You got back _____

\$5.68

3) You bought  for \$17.21.

You paid _____

You got back _____


PREVIEW

Gain complete access to the largest collection of worksheets in all subjects!

Members, please log in to download this worksheet.


Not a member? Please sign up to gain complete access.

www.mathworksheets4kids.com

You paid  .


You got back _____

\$1.18

5) You bought  for \$49.99.

You paid _____

You got back _____

You paid  .

You got back _____

\$26.00

7) Kevin buys an alarm clock that costs \$17.76 and pays with a twenty dollar bill. How much change did he receive?

\$2.24

8) Mr. Anderson went to the store to buy Juan a bike. The bike cost \$89.00, and he made the payment with a hundred-dollar bill. How much change was given to Mr. Anderson?

\$11.00