



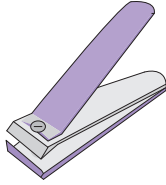
Name : _____


It's Time for Change

1) You bought  for \$17.95.


You paid  .

You got back _____

2) You bought  for \$3.14.

You paid  .

You got back _____

3) You bought  for \$65.00.

You paid _____

You got back _____


PREVIEW

Gain complete access to the largest collection of worksheets in all subjects!


Members, please log in to download this worksheet.

Not a member? Please sign up to gain complete access.

www.mathworksheets4kids.com


4) You paid  .

You got back _____

5) You bought  for \$9.10.

You paid _____

You got back _____

6) You paid  .


You got back _____


7) Rhea bought a hat worth \$9.99 and paid with a ten dollar bill. How much change did Rhea receive?

8) Scarlett went to a store to buy a pack of crayons. The pack cost \$3.56 and she handed a five-dollar bill to the storekeeper. How much did Scarlett get?

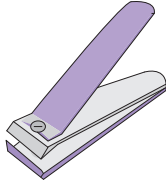
Name : _____


It's Time for Change

1) You bought  for \$17.95.


You paid  .

You got back _____ **\$32.05**

2) You bought  for \$3.14.

You paid  .

You got back _____ **\$1.86**

3) You bought  for \$65.00.

You paid _____

You got back _____


PREVIEW

Gain complete access to the largest collection of worksheets in all subjects!


Members, please log in to download this worksheet.

Not a member? Please sign up to gain complete access.

www.mathworksheets4kids.com


4) You paid  .

You got back _____ **\$3.31**

5) You bought  for \$9.10.

You paid _____

You got back _____

6) You paid  .

You got back _____ **\$4.29**

7) Rhea bought a hat worth \$9.99 and paid with a ten dollar bill. How much change did Rhea receive?

_____ **\$0.01**

8) Scarlett went to a store to buy a pack of crayons. The pack cost \$3.56 and she handed a five-dollar bill to the storekeeper. How much did Scarlett get?

_____ **\$1.44**