

Name : _____

Money Conversion

A) Convert cents to dollars.

1) 583¢ = _____

2) 64¢ = _____

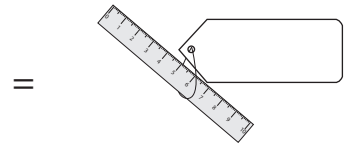
3) 447¢ = _____

4) 210¢ = _____

5) 89¢ = _____

6) 5¢ = _____

7)  900¢ = _____



9) Cole bought a pack of _____
the pack?

_____ dollars did he pay to buy

PREVIEW

Gain complete access to the largest collection of worksheets in all subjects!

Members, please log in to download this worksheet.

Not a member? Please sign up to gain complete access.

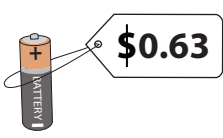
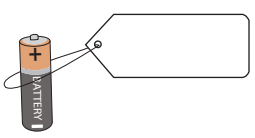
www.mathworksheets4kids.com



B) Convert dollars to cents

1) $\$6.06$ = _____

3) $\$0.35$ = _____

5) $\$8.68$ = _____

7)  $\$0.63$ = 

8)  $\$9.59$ = 

9) Emma saves $\$4.25$ in her piggy bank. How many cents does Emma have in her piggy bank?

Name : _____

Money Conversion

A) Convert cents to dollars.

1) 583¢ = \$5.83

2) 64¢ = \$0.64

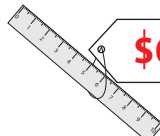
3) 447¢ = \$4.47

4) 210¢ = \$2.10

5) 89¢ = \$0.89

6) 5¢ = \$0.05

7)  **900¢** = _____

_____ =  **\$0.12**

9) Cole bought a pack of 500 pencils for \$5.00. How many dollars did he pay to buy the pack?
5 dollars

_____ dollars did he pay to buy

PREVIEW

Gain complete access to the largest collection of worksheets in all subjects!

Members, please log in to download this worksheet.

Not a member? Please sign up to gain complete access.

www.mathworksheets4kids.com

B) Convert dollars to cents

1) \$6.06 = _____

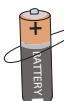
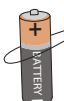
_____ **4¢**



3) \$0.35 = _____

_____ **400¢**

5) \$8.68 = _____

_____ **10¢**

7)  **\$0.63** =  **63¢**

8)  **\$9.59** =  **959¢**

9) Emma saves \$4.25 in her piggy bank. How many cents does Emma have in her piggy bank?
425 cents