

Name : _____

Money Conversion

A) Convert cents to dollars.

1) $178¢ =$ _____

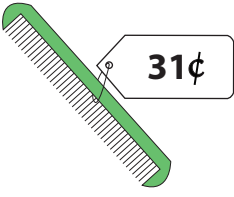
2) $809¢ =$ _____

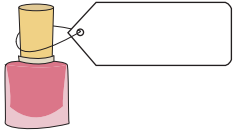
3) $50¢ =$ _____

4) $600¢ =$ _____

5) $7¢ =$ _____

6) $46¢ =$ _____

7)  $31¢ =$ _____

$=$  _____

9) Richard has 199 cents.

_____ in his collection?

PREVIEW

Gain complete access to the largest collection of worksheets in all subjects!

Members, please log in to download this worksheet.

Not a member? Please sign up to gain complete access.

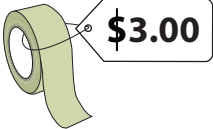
www.mathworksheets4kids.com


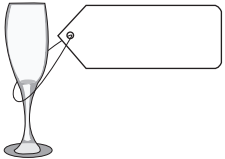
B) Convert dollars to cents

1) $\$0.27 =$ _____

3) $\$0.08 =$ _____

5) $\$2.90 =$ _____

7)  $\$3.00 =$  _____

8)  $\$0.29 =$  _____

9) Natalie gifted a board game worth \$8.99 to her little sister Jess. How many cents has Natalie spent to buy the gift?

Name : _____

Money Conversion

A) Convert cents to dollars.

1) 178¢ = \$1.78

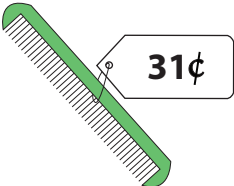
2) 809¢ = \$8.09

3) 50¢ = \$0.50

4) 600¢ = \$6.00

5) 7¢ = \$0.07

6) 46¢ = \$0.46

7)  =

PREVIEW

Gain complete access to the largest collection of worksheets in all subjects!

Members, please log in to download this worksheet.

Not a member? Please sign up to gain complete access.

www.mathworksheets4kids.com

= 

9) Richard has 199 cents in his collection.
1.99 dollars

in his collection?

B) Convert dollars to cents.

1) \$0.27 = 27 cents

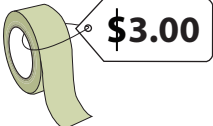
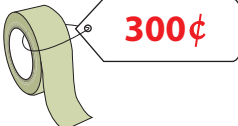
905¢

3) \$0.08 = 8 cents

41¢

5) \$2.90 = 290 cents

162¢

7)  = 

8)  = 

9) Natalie gifted a board game worth \$8.99 to her little sister Jess. How many cents has Natalie spent to buy the gift?

899 cents