


Name : _____

ES1


Let's Go Shopping!

FOOD STORE

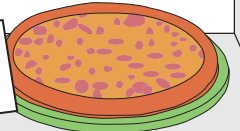
\$11.50




\$3.63



\$15.00



\$4.79



PREVIEW


Gain complete access to the largest collection of worksheets in all subjects!

Members, please log in to download this worksheet.

Not a member? Please sign up to gain complete access.

www.mathworksheets4kids.com

\$63.92



\$5.00

- 1) John buys a sandwich.
What is the price of the sandwich?
How much change did he receive?

- 2) Robert buys a cake. He pays the cashier \$70.00.
What is the price of the cake?
How much change did he receive?

\$70.00

- 3) Susan buys a pizza. She pays the cashier \$20.00.
What is the price of the pizza?
How much change did she receive?

\$20.00

- 4) William buys a tub of popcorn. He pays the cashier \$50.00.
What is the price of the popcorn?
How much change did he receive?

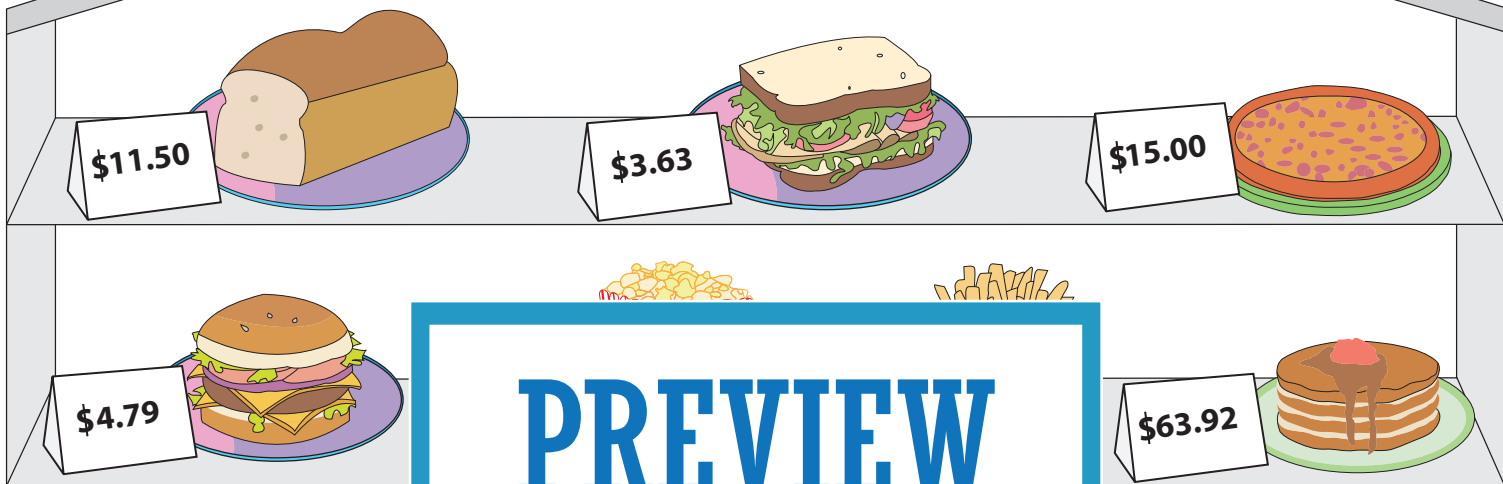
\$50.00

- 5) Maria buys a loaf of bread. She pays the cashier \$15.00.
What is the price of the bread?
How much change did she receive?

\$15.00

Let's Go Shopping!

FOOD STORE



PREVIEW

Gain complete access to the largest collection of worksheets in all subjects!

Members, please log in to download this worksheet.

Not a member? Please sign up to gain complete access.

www.mathworksheets4kids.com

- | | | |
|----|---|---|
| 1) | John buys a sandwich. What is the price of the sandwich? How much change did he receive? | <p>\$5.00</p> <p><u> \$3.63 </u></p> <p><u> \$1.37 </u></p> |
| 2) | Robert buys a cake. He pays the cashier \$70.00. What is the price of the cake? How much change did he receive? | <p>\$70.00</p> <p><u> \$63.92 </u></p> <p><u> \$6.08 </u></p> |
| 3) | Susan buys a pizza. She pays the cashier \$20.00. What is the price of the pizza? How much change did she receive? | <p>\$20.00</p> <p><u> \$15.00 </u></p> <p><u> \$5.00 </u></p> |
| 4) | William buys a tub of popcorn. He pays the cashier \$50.00. What is the price of the popcorn? How much change did he receive? | <p>\$50.00</p> <p><u> \$8.98 </u></p> <p><u> \$41.02 </u></p> |
| 5) | Maria buys a loaf of bread. She pays the cashier \$15.00. What is the price of the bread? How much change did she receive? | <p>\$15.00</p> <p><u> \$11.50 </u></p> <p><u> \$3.50 </u></p> |