


Name : _____

ES2

Let's Go Shopping!

SPORTING GOODS STORE

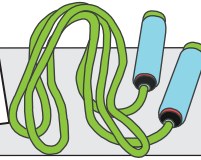
\$17.42




\$12.50



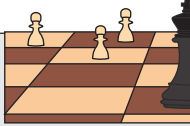
\$9.87



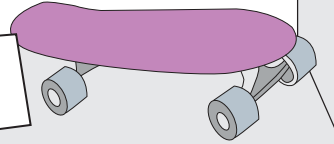
\$11.99



\$22.00



5.85



PREVIEW

Gain complete access to the largest
collection of worksheets in all subjects!

Members, please
log in to
download this
worksheet.

Not a member?
Please sign up to
gain complete
access.

www.mathworksheets4kids.com

1)

Ethan buys a skateboard.
What is the price of the skateboard?
How much change did he receive?

\$40.00

2)

Susan buys a skipping rope.
What is the price of the skipping rope?
How much change did she receive?

\$50.00

3)

Michael buys a soccer ball.
What is the price of the soccer ball?
How much change did he receive?

\$15.00

4)

Richard buys a baseball bat. He pays the cashier \$100.00.
What is the price of the baseball bat?
How much change did he receive?

\$100.00

5)

Nancy buys a basketball. She pays the cashier \$50.00.
What is the price of the basketball?
How much change did she receive?

\$50.00

Name : _____

Let's Go Shopping!

SPORTING GOODS STORE



PREVIEW

Gain complete access to the largest collection of worksheets in all subjects!

Members, please log in to download this worksheet.

Not a member? Please sign up to gain complete access.

www.mathworksheets4kids.com

- | | | |
|----|------------------------------------------------------------------------------------------------------------------------------------------|-----------------------------------------------------------------|
| 1) | Ethan buys a skateboard. He pays the cashier \$40.00.
What is the price of the skateboard?
How much change did he receive? | <p>\$40.00</p> <hr/> <p>\$35.85</p> <hr/> <p>\$4.15</p> <hr/> |
| 2) | Susan buys a skipping rope. She pays the cashier \$50.00.
What is the price of the skipping rope?
How much change did she receive? | <p>\$50.00</p> <hr/> <p>\$9.87</p> <hr/> <p>\$40.13</p> <hr/> |
| 3) | Michael buys a soccer ball. He pays the cashier \$15.00.
What is the price of the soccer ball?
How much change did he receive? | <p>\$15.00</p> <hr/> <p>\$12.50</p> <hr/> <p>\$2.50</p> <hr/> |
| 4) | Richard buys a baseball bat. He pays the cashier \$100.00.
What is the price of the baseball bat?
How much change did he receive? | <p>\$100.00</p> <hr/> <p>\$51.55</p> <hr/> <p>\$48.45</p> <hr/> |
| 5) | Nancy buys a basketball. She pays the cashier \$50.00.
What is the price of the basketball?
How much change did she receive? | <p>\$50.00</p> <hr/> <p>\$11.99</p> <hr/> <p>\$38.01</p> <hr/> |