


Let's Go Shopping!

HOME APPLIANCES STORE


\$75.45



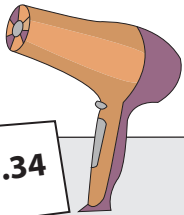
\$55.95



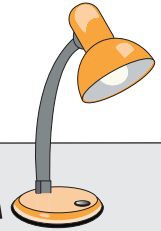
\$11.29



\$20.34



\$43.57



PREVIEW

Gain complete access to the largest collection of worksheets in all subjects!

Members, please log in to download this worksheet.

Not a member? Please sign up to gain complete access.

www.mathworksheets4kids.com

\$70.00

\$15.00

\$100.00

\$45.00

\$50.00

1) Mark buys an iron box for \$70.00.
What is the price of the iron box?
How much change did he receive?

2) Rose buys a fry pan. She pays the cashier \$15.00.
What is the price of the fry pan?
How much change did she receive?

3) Jessica buys a mixer for \$100.00.
What is the price of the mixer?
How much change did she receive?

4) Thomas buys a study lamp. He pays the cashier \$45.00.
What is the price of the study lamp?
How much change did he receive?

5) Amy buys a toaster. She pays the cashier \$50.00.
What is the price of the toaster?
How much change did she receive?

Name : _____

Let's Go Shopping!

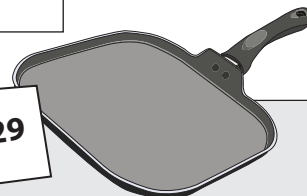
HOME APPLIANCES STORE



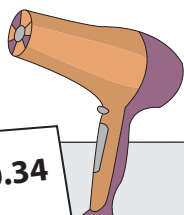
\$75.45



\$55.95



\$11.29



\$20.34



\$43.57

PREVIEW

Gain complete access to the largest collection of worksheets in all subjects!

Members, please log in to download this worksheet.

Not a member? Please sign up to gain complete access.

www.mathworksheets4kids.com

1) Mark buys an iron box for \$70.00.
What is the price of the iron box?
How much change did he receive?

\$70.00

\$65.63

\$4.37

2) Rose buys a fry pan. She pays the cashier \$55.95.
What is the price of the fry pan?
How much change did she receive?

\$15.00

\$11.29

\$3.71

3) Jessica buys a mixer for \$75.45.
What is the price of the mixer?
How much change did she receive?

\$100.00

\$75.45

\$24.55

4) Thomas buys a study lamp. He pays the cashier \$45.00.
What is the price of the study lamp?
How much change did he receive?

\$45.00

\$43.57

\$1.43

5) Amy buys a toaster. She pays the cashier \$50.00.
What is the price of the toaster?
How much change did she receive?

\$50.00

\$17.50

\$32.50