

Name : _____

Score : _____






Counting Nickels and Dimes

Sheet 1

1 nickel = 5¢ or 5 cents

1 dime = 10¢ or 10 cents

Count the coins and write the total amount.

1) 	_____ ¢
2) 	_____ ¢
3) 	_____ ¢
4) 	 _____ ¢
5) 3 dimes = _____	_____ nickels = _____ ¢

PREVIEW

Access the largest collection of worksheets for just **\$19.95** per year!

Members, please log in to download this worksheet.

Log in

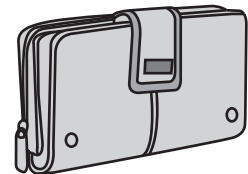
Not a member? Please sign up to gain complete access.

Sign up

www.mathworksheets4kids.com


7) Monica had 5 nickels in her wallet. How much money did she have?

_____ ¢



8) If an apple costs 40¢, how many dimes do you need to buy it?

_____ dimes



Name : _____

Score : _____

Answer key





Counting Nickels and Dimes

Sheet 1

1 nickel = 5¢ or 5 cents

1 dime = 10¢ or 10 cents

Count the coins and write the total amount.

1) 	<u>35</u> ¢
2) 	<u>50</u> ¢
3) 	<u>20</u> ¢
4) 	<u>80</u> ¢
5) 3 dimes = <u>30</u>	nickels = <u>50</u> ¢

PREVIEW

Access the largest collection of worksheets for just **\$19.95** per year!

Members, please log in to download this worksheet.

Log in

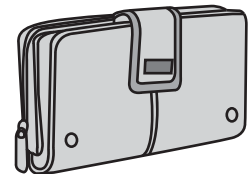
Not a member? Please sign up to gain complete access.

Sign up

www.mathworksheets4kids.com

7) Monica had 5 nickels in her wallet. How much money did she have?

25 ¢



8) If an apple costs 40¢, how many dimes do you need to buy it?

4 dimes

