

Name : _____

Score : _____





Counting Nickels and Dimes

Sheet 2

1 nickel = 5¢ or 5 cents

1 dime = 10¢ or 10 cents

Count the coins and write the total amount.

1) 	_____ ¢
2) 	_____ ¢
3) 	_____ ¢
4) 	_____ ¢
5) 9 nickels = _____	dimes = _____ ¢

PREVIEW

Access the largest collection of worksheets for just **\$19.95** per year!

Members, please log in to download this worksheet.

Log in


Not a member? Please sign up to gain complete access.

Sign up

www.mathworksheets4kids.com

7) Robin had 9 dimes in his piggybank. How much money did he have?

_____ ¢



8) If a pair of socks costs 50 ¢, how many nickels do you need to buy it?

_____ nickels



Name : _____

Score : _____

Answer key





Counting Nickels and Dimes

Sheet 2

1 nickel = 5¢ or 5 cents

1 dime = 10¢ or 10 cents

Count the coins and write the total amount.

1) 	<u>60</u> ¢
2) 	<u>40</u> ¢
3) 	<u>15</u> ¢
4) 	<u>40</u> ¢
5) 9 nickels = <u>45</u>	dimes = <u>70</u> ¢

PREVIEW

Access the largest collection of worksheets for just **\$19.95** per year!


Members, please log in to download this worksheet. **Log in**

Not a member? Please sign up to gain complete access. **Sign up**

www.mathworksheets4kids.com

7) Robin had 9 dimes in his piggybank. How much money did he have?

90 ¢



8) If a pair of socks costs 50 ¢, how many nickels do you need to buy it?

10 nickels

