

Name : \_\_\_\_\_

Score : \_\_\_\_\_





## Counting Nickels and Dimes

Sheet 3

1 nickel = 5¢ or 5 cents

1 dime = 10¢ or 10 cents

Count the coins and write the total amount.

1) 	_____ ¢
2) 	_____ ¢
3) 	_____ ¢
4) 	_____ ¢
5) 10 nickels = _____	dimes = _____ ¢

# PREVIEW

Access the largest collection of worksheets for just **\$19.95** per year!


Members, please  
log in to  
download this  
worksheet.  
**Log in**

Not a member?  
Please sign up to  
gain complete  
access.  
**Sign up**

[www.mathworksheets4kids.com](http://www.mathworksheets4kids.com)

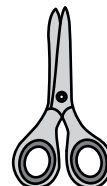
7) Mathew had 2 dimes in his money bank. How much money did he have?

\_\_\_\_\_ ¢



8) If a pair of scissors costs 25 ¢, how many nickels do you need to buy it?

\_\_\_\_\_ nickels



Name : \_\_\_\_\_

Score : \_\_\_\_\_

### Answer key





## Counting Nickels and Dimes

Sheet 3

1 nickel = 5¢ or 5 cents

1 dime = 10¢ or 10 cents

Count the coins and write the total amount.

1) 	<p style="text-align: right;"><u>  50  </u> ¢</p>
2) 	<p style="text-align: right;"><u>  10  </u> ¢</p>
3) 	<p style="text-align: right;"><u>  30  </u> ¢</p>
4) 	<p style="text-align: right;"><u>  30  </u> ¢</p>
5) 10 nickels = <u>  50  </u>	6) 6 dimes = <u>  60  </u> ¢

# PREVIEW

Access the largest collection of worksheets for just **\$19.95** per year!

Members, please log in to download this worksheet.

**Log in**


Not a member? Please sign up to gain complete access.

**Sign up**

[www.mathworksheets4kids.com](http://www.mathworksheets4kids.com)

7) Mathew had 2 dimes in his money bank. How much money did he have?

  20   ¢



8) If a pair of scissors costs 25 ¢, how many nickels do you need to buy it?

  5   nickels

