


Name : _____





Score : _____

Counting Nickels

Sheet 1

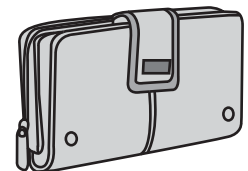


Count the nickels and write the total amount.

1) 	_____ ¢
2) 	_____ ¢
3) 	_____ ¢
4) 	_____ ¢
5) 4 nickels = _____ ¢	6) 9 nickels = _____ ¢

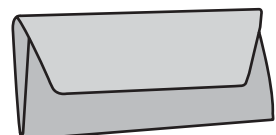
7) Shirley had 5 nickels in her wallet. How much money did she have?

_____ ¢



8) Joyce had 50 ¢ in her wallet. If she had all the coins in nickel, how many nickels did she have?

_____ nickels



Name : _____

Score : _____

Answer key





Counting Nickels

Sheet 1



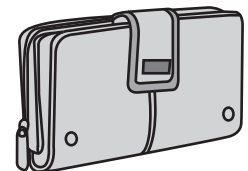
= 5 ¢ or 5 cents

Count the nickels and write the total amount.

1) 	<u> 30 </u> ¢
2) 	<u> 15 </u> ¢
3) 	<u> 35 </u> ¢
4) 	<u> 10 </u> ¢
5) 4 nickels = <u> 20 </u> ¢	6) 9 nickels = <u> 45 </u> ¢

7) Shirley had 5 nickels in her wallet. How much money did she have?

 25 ¢



8) Joyce had 50 ¢ in her wallet. If she had all the coins in nickel, how many nickels did she have?

 10 nickels

