

Name : \_\_\_\_\_

Score : \_\_\_\_\_

# Counting Nickels

Sheet 2



Count the nickels and write the total amount.

1)	_____ ¢
2)	_____ ¢
3)	_____ ¢
4)	_____ ¢
5) 10 nickels = _____	_____ ¢

## PREVIEW

Access the largest collection of worksheets for just **\$19.95** per year!

Members, please log in to download this worksheet.

**Log in**

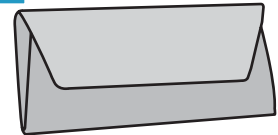
Not a member? Please sign up to gain complete access.

**Sign up**

[www.mathworksheets4kids.com](http://www.mathworksheets4kids.com)

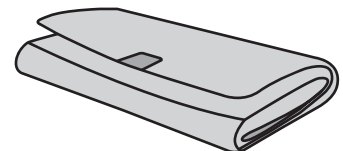
7) Julie had 2 nickels in her wallet. How much money did she have?

\_\_\_\_\_ ¢



8) Rose had 45 ¢ in her wallet. If she had all the coins in nickel, how many nickels did she have?

\_\_\_\_\_ nickels




Name : \_\_\_\_\_

Score : \_\_\_\_\_





### Answer key

# Counting Nickels

Sheet 2



Count the nickels and write the total amount.

1) 	<u>  40  </u> ¢
2) 	<u>  25  </u> ¢
3) 	<u>  15  </u> ¢
4) 	<u>  30  </u> ¢
5) 10 nickels = <u>  50  </u>	nickels = <u>  35  </u> ¢

## PREVIEW

Access the largest collection of worksheets for just **\$19.95** per year!

Members, please log in to download this worksheet.

Log in

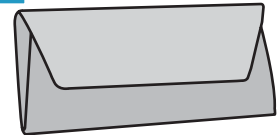
Not a member? Please sign up to gain complete access.

Sign up

www.mathworksheets4kids.com

7) Julie had 2 nickels in her wallet. How much money did she have?

  10   ¢



8) Rose had 45 ¢ in her wallet. If she had all the coins in nickel, how many nickels did she have?

  9   nickels

