






Name : \_\_\_\_\_

Score : \_\_\_\_\_

# Counting Nickels



Count the nickels and write the total amount.

1) 		_____ ¢
2) 		_____ ¢
3) 		_____ ¢
4) 		_____ ¢
5) 3 nickels = _____		_____ ¢

## PREVIEW

Access the largest collection of worksheets for just **\$19.95** per year!

Members, please log in to download this worksheet.

**Log in**

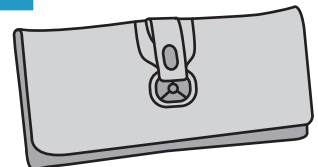
Not a member? Please sign up to gain complete access.

**Sign up**

[www.mathworksheets4kids.com](http://www.mathworksheets4kids.com)

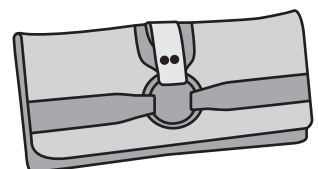
7) Diana had 6 nickels in her wallet. How much money did she have?

\_\_\_\_\_ ¢



8) Clara had 40 ¢ in her wallet. If she had all the coins in nickel, how many nickels did she have?

\_\_\_\_\_ nickels



Name : \_\_\_\_\_

Score : \_\_\_\_\_





### Answer key

# Counting Nickels

Sheet 3



Count the nickels and write the total amount.

1) 	<p style="text-align: right;"><u>  25  </u> ¢</p>
2) 	<p style="text-align: right;"><u>  10  </u> ¢</p>
3) 	<p style="text-align: right;"><u>  20  </u> ¢</p>
4) 	<p style="text-align: right;"><u>  35  </u> ¢</p>
5) 3 nickels = <u>  15  </u>	nickels = <u>  50  </u> ¢

## PREVIEW

Access the largest collection of worksheets for just **\$19.95** per year!

Members, please log in to download this worksheet.

Log in

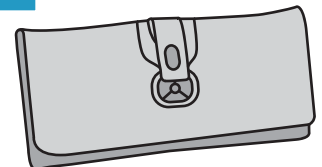
Not a member? Please sign up to gain complete access.

Sign up

[www.mathworksheets4kids.com](http://www.mathworksheets4kids.com)

7) Diana had 6 nickels in her wallet. How much money did she have?

  30   ¢



8) Clara had 40 ¢ in her wallet. If she had all the coins in nickel, how many nickels did she have?

  8   nickels

