

Name : \_\_\_\_\_

Score : \_\_\_\_\_





## Counting Quarters and Half-Dollars

Sheet 2

Count the coins and write the total amount.

1 half-dollar = 50 ¢ or \$0.50

1 quarter = 25 ¢ or \$0.25

1) 	\$ _____
2) 	\$ _____
3) 	\$ _____
4) 	\$ _____
5) 6 quarters = \$ _____	Half-dollars = \$ _____

# PREVIEW

Access the largest collection of worksheets for just **\$19.95** per year!


Members, please log in to download this worksheet. **Log in**

Not a member? Please sign up to gain complete access. **Sign up**

[www.mathworksheets4kids.com](http://www.mathworksheets4kids.com)

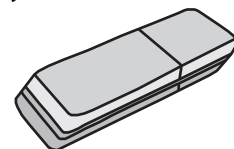
7) How many quarters do you need to buy a notebook?

\_\_\_\_\_ quarters



8) Ronald bought an eraser with 3 half-dollars. How much money did he pay?

\$ \_\_\_\_\_



Name : \_\_\_\_\_

Score : \_\_\_\_\_

## Answer key





# Counting Quarters and Half-Dollars

Sheet 2

Count the coins and write the total amount.

1 half-dollar = 50 ¢ or \$0.50

1 quarter = 25 ¢ or \$0.25

1) 	\$ <u>1.00</u>
2) 	\$ <u>3.00</u>
3) 	\$ <u>2.00</u>
4) 	\$ <u>0.50</u>
5) 6 quarters = \$ <u>1.50</u>	4 half-dollars = \$ <u>4.00</u>

# PREVIEW

Access the largest collection of worksheets for just **\$19.95** per year!


Members, please log in to download this worksheet. **Log in**

Not a member? Please sign up to gain complete access. **Sign up**

[www.mathworksheets4kids.com](http://www.mathworksheets4kids.com)

7) How many quarters do you need to buy a notebook?

8 quarters



8) Ronald bought an eraser with 3 half-dollars. How much money did he pay?

\$ 1.50

