

Name : \_\_\_\_\_

Score : \_\_\_\_\_





## Counting Quarters and Half-Dollars

Sheet 3

Count the coins and write the total amount.

1 half-dollar = 50 ¢ or \$0.50

1 quarter = 25 ¢ or \$0.25

|  |                     |
|--|---------------------|
| 1)   | \$ _____            |
| 2)    | \$ _____            |
| 3)   | \$ _____            |
| 4)  | \$ _____            |
| 5) 5 half-dollars = \$ _____   | quarters = \$ _____ |

# PREVIEW

Access the largest collection of worksheets for just **\$19.95** per year!

Members, please log in to download this worksheet.

**Log in**

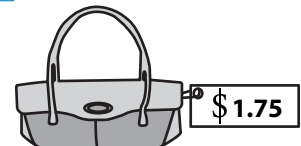
Not a member? Please sign up to gain complete access.

**Sign up**

[www.mathworksheets4kids.com](http://www.mathworksheets4kids.com)


7) How many quarters do you need to buy a handbag?

\_\_\_\_\_ quarters



8) Emma bought a dress with 6 half-dollars. How much money did she pay?

\$ \_\_\_\_\_



Name : \_\_\_\_\_

Score : \_\_\_\_\_

## Answer key





# Counting Quarters and Half-Dollars

Sheet 3

Count the coins and write the total amount.

1 half-dollar = 50 ¢ or \$0.50

1 quarter = 25 ¢ or \$0.25

|  |                           |
|--|---------------------------|
| 1)   | \$ <u>1.50</u>            |
| 2)    | \$ <u>1.50</u>            |
| 3)   | \$ <u>1.25</u>            |
| 4)  | \$ <u>1.00</u>            |
| 5) 5 half-dollars = \$ <u>2.50</u>   | quarters = \$ <u>2.50</u> |

# PREVIEW

Access the largest collection of worksheets for just **\$19.95** per year!

Members, please log in to download this worksheet.

[Log in](#)

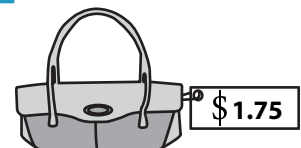
Not a member? Please sign up to gain complete access.

[Sign up](#)

[www.mathworksheets4kids.com](http://www.mathworksheets4kids.com)

7) How many quarters do you need to buy a handbag?

7 quarters



8) Emma bought a dress with 6 half-dollars. How much money did she pay?

\$ 3.00

