

Name : _____

What is the Discount?

The store has put up some items on sale. What is the discount offered on each item?

1)



Discount: \$ _____

2)



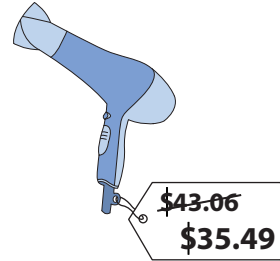
Discount: \$ _____

3)



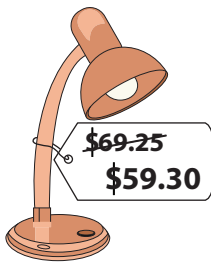
Discount: \$ _____

4)




Discount: \$ _____

5)



Discount: \$ _____

6)



Discount: \$ _____

7)



Discount: \$ _____

8)



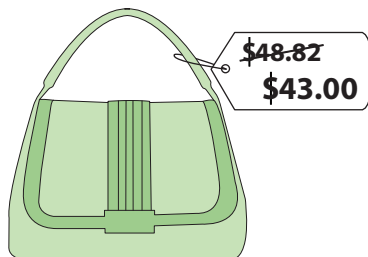
Discount: \$ _____

Name : _____

What is the Discount?

The store has put up some items on sale. What is the discount offered on each item?

1)



Discount: \$ 5.82

2)



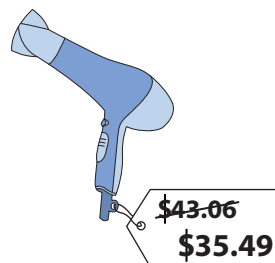
Discount: \$ 8.13

3)



Discount: \$ 3.00

4)




Discount: \$ 7.57

5)



Discount: \$ 9.95

6)



Discount: \$ 17.74

7)



Discount: \$ 6.19

8)



Discount: \$ 4.01