

What is the Discount?

The store has put up some items on sale. What is the discount offered on each item?

1)




Discount: \$ _____

2)



Discount: \$ _____

3)



Discount: \$ _____

PREVIEW

Gain complete access to the largest collection of worksheets in all subjects!

Members, please log in to download this worksheet.

Not a member? Please sign up to gain complete access.

www.mathworksheets4kids.com

~~\$54.82~~
\$52.90

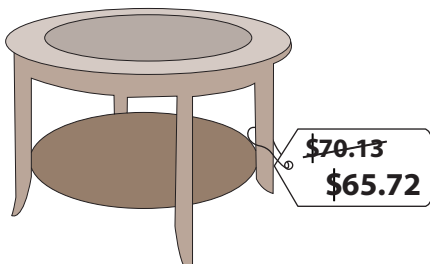
5)



Discount: \$ _____

~~\$26.00~~
\$22.60

7)



Discount: \$ _____

8)



Discount: \$ _____

What is the Discount?

The store has put up some items on sale. What is the discount offered on each item?

1)




Discount: \$ 6.26

2)



Discount: \$ 4.95

3)



Discount: \$ 7

PREVIEW

Gain complete access to the largest collection of worksheets in all subjects!

Members, please log in to download this worksheet.

Not a member? Please sign up to gain complete access.

www.mathworksheets4kids.com

~~\$54.82~~
\$52.90

Discount: \$ 1.92

5)




Discount: \$ 11

~~\$26.00~~
\$22.60

Discount: \$ 3.40

7)



Discount: \$ 4.41

8)



Discount: \$ 5.43