

What is the Discount?


The store has put up some items on sale. What is the discount offered on each item?

1)




Discount: \$ _____

2)



Discount: \$ _____

3)



Discount: \$ _____


PREVIEW

Gain complete access to the largest collection of worksheets in all subjects!

Members, please log in to download this worksheet.

Not a member? Please sign up to gain complete access.

www.mathworksheets4kids.com




Discount: \$ _____

5)

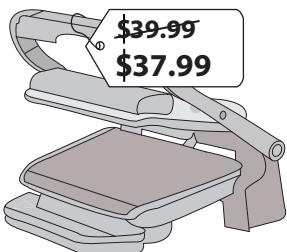


Discount: \$ _____



Discount: \$ _____

7)



Discount: \$ _____

8)



Discount: \$ _____

What is the Discount?


The store has put up some items on sale. What is the discount offered on each item?

1)




Discount: \$ 10.09

2)



Discount: \$ 6.29

3)



Discount: \$ 1.00


PREVIEW

Gain complete access to the largest collection of worksheets in all subjects!

Members, please log in to download this worksheet.

Not a member? Please sign up to gain complete access.

www.mathworksheets4kids.com




4.45

5)

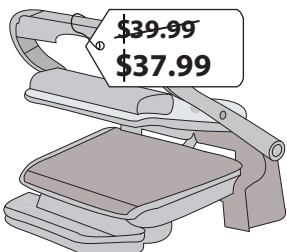


Discount: \$ 3.68



8.73

7)



Discount: \$ 2.00

8)



Discount: \$ 5.73