

Name : \_\_\_\_\_

## What is the difference?

1)  $\begin{array}{r} \$19.36 \\ - \$10.20 \\ \hline \end{array}$

2)  $\begin{array}{r} \$37.38 \\ - \$25.19 \\ \hline \end{array}$

3)  $\begin{array}{r} \$61.65 \\ - \$12.63 \\ \hline \end{array}$

4)  $\begin{array}{r} \$90.15 \\ - \$56.23 \\ \hline \end{array}$

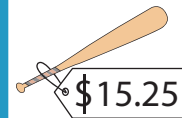
5)  $\$48.75 - \$13.00 =$  \_\_\_\_\_

6)  $\$70.32 - \$59.97 =$  \_\_\_\_\_


7)  $\$97.91 - \$11.55 =$  \_\_\_\_\_

8)  $_____ - 1.56 =$  \_\_\_\_\_

9)  \_\_\_\_\_

  $\$15.25 =$  \_\_\_\_\_

11)  \_\_\_\_\_

  $\$10.88 =$  \_\_\_\_\_

13) Mady and Liam counted \$34.37. How much more money do they need?

Mady had \$36.75, and Liam had \$12.50. How much money do they have in total?

**PREVIEW**

Gain complete access to the largest collection of worksheets in all subjects!

Members, please log in to download this worksheet.

Not a member? Please sign up to gain complete access.

[www.mathworksheets4kids.com](http://www.mathworksheets4kids.com)

14) Grandpa takes Abigail to the San Diego Zoo, with \$98.28 in his wallet. He pays \$96.40 at the counter, and gets two 1-day passes. How much does Grandpa have in his wallet now?

Name : \_\_\_\_\_

**What is the difference?**

$$\begin{array}{r} 1) \quad \$19.36 \\ - \$10.20 \\ \hline \end{array}$$

**\$9.16**

$$\begin{array}{r} 2) \quad \$37.38 \\ - \$25.19 \\ \hline \end{array}$$

**\$12.19**

$$\begin{array}{r} 3) \quad \$61.65 \\ - \$12.63 \\ \hline \end{array}$$

**\$49.02**

$$\begin{array}{r} 4) \quad \$90.15 \\ - \$56.23 \\ \hline \end{array}$$

**\$33.92**

5)  $\$48.75 - \$13.00 = \underline{\mathbf{\$35.75}}$

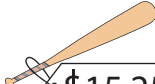
6)  $\$70.32 - \$59.97 = \underline{\mathbf{\$10.35}}$

7)  $\$97.91 - \$11.55$

$1.56 = \underline{\mathbf{\$52.98}}$

9)  - 


**PREVIEW**  
Gain complete access to the largest collection of worksheets in all subjects!

 =  $\underline{\mathbf{\$0.25}}$   
 $\$15.25$

11)  - 

Members, please log in to download this worksheet.

Not a member? Please sign up to gain complete access.

 =  $\underline{\mathbf{\$0.12}}$   
 $\$10.88$

13) Mady and Liam counted \$34.37. How much more money do they need?

[www.mathworksheets4kids.com](http://www.mathworksheets4kids.com)

Mady had \$36.75, and Liam had \$32.50. How much money do they have in total?

**\$2.38**

14) Grandpa takes Abigail to the San Diego Zoo, with \$98.28 in his wallet. He pays \$96.40 at the counter, and gets two 1-day passes. How much does Grandpa have in his wallet now?

**\$1.88**