


# Counting to 10


Count the number of objects in each set, and circle the correct number.

1)




5    6    7

2)

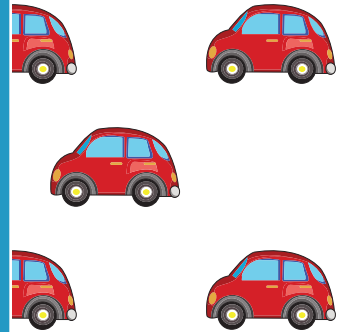


8    9    10

3)




3    4    5




7    8    9

5)



4    5    6    7    8



6    7    8    9    10

# PREVIEW

Gain complete access to the largest collection of worksheets in all subjects!

Members, please log in to download this worksheet.


Not a member? Please sign up to gain complete access.

[www.mathworksheets4kids.com](http://www.mathworksheets4kids.com)

**Counting to 10**

Count the number of objects in each set, and circle the correct number.

1)




5

6

7

2)




8

9

10

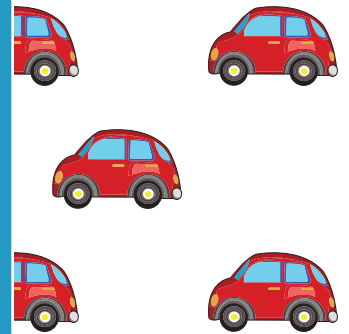
3)



3

4

5




7

8

9

5)




4

5

6

7

8



6

7

8

9

10

**PREVIEW**Gain complete access to the largest  
collection of worksheets in all subjects!Members, please  
log in to  
download this  
worksheet.Not a member?  
Please sign up to  
gain complete  
access.[www.mathworksheets4kids.com](http://www.mathworksheets4kids.com)