



Name : \_\_\_\_\_

# Count and Compare

Sheet 1




How many  ? \_\_\_\_\_




How many  ? \_\_\_\_\_

Which of




How many  ? \_\_\_\_\_


Which of



 ? \_\_\_\_\_



How many  ? \_\_\_\_\_



How many  ? \_\_\_\_\_

Which of these are more?



# PREVIEW


Gain complete access to the largest collection of worksheets in all subjects!

Members, please log in to download this worksheet.


Not a member? Please sign up to gain complete access.

[www.mathworksheets4kids.com](http://www.mathworksheets4kids.com)

# Count and Compare




How many  ? 10




How many  ? 6

Which of




How many  ?


Which of



 ? 5



How many  ? 8



How many  ? 9

Which of these are more?



**PREVIEW**

Gain complete access to the largest collection of worksheets in all subjects!

Members, please log in to download this worksheet.

Not a member? Please sign up to gain complete access.

[www.mathworksheets4kids.com](http://www.mathworksheets4kids.com)