



Name : _____

Count and Compare

Sheet 2



How many  ? _____




How many  ? _____

Which one




How many  ? _____


Which one



 ? _____

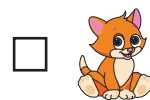
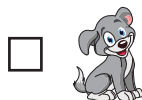


How many  ? _____



How many  ? _____

Which of these are more?



PREVIEW


Gain complete access to the largest collection of worksheets in all subjects!

Members, please log in to download this worksheet.


Not a member? Please sign up to gain complete access.

www.mathworksheets4kids.com

Count and Compare



How many  ? 7




How many  ? 4

Which one is more?



How many  ? 5

Which one is more?



 ? 5




PREVIEW

Gain complete access to the largest collection of worksheets in all subjects!


Members, please log in to download this worksheet.

Not a member? Please sign up to gain complete access.

www.mathworksheets4kids.com



How many  ? 2



How many  ? 4

Which of these are more?

