



Name : _____

Count and Compare

Sheet 3




How many  ? _____




How many  ? _____

Which one



How many  ? _____

Which one




Gain complete access to the largest collection of worksheets in all subjects!

Members, please log in to download this worksheet.

Not a member? Please sign up to gain complete access.

www.mathworksheets4kids.com



How many  ? _____




How many  ? _____


Which of these are fewer?



Count and Compare




How many  ? 9



How many  ? 6

Which of




PREVIEW

Gain complete access to the largest collection of worksheets in all subjects!


Members, please log in to download this worksheet.

Not a member? Please sign up to gain complete access.

www.mathworksheets4kids.com


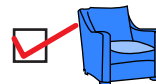


How many  ?




? 2

Which of



How many  ? 6



How many  ? 3

Which of these are fewer?

