


Name : _____

Counting to 20

Sheet 3

Count the number of objects in each section, and circle the correct number.


1)



16

17


2)



9


10

3)



17

18



16

17

5)




7

8

9

10



12

13

14

15

PREVIEW

Gain complete access to the largest collection of worksheets in all subjects!

Members, please log in to download this worksheet.


Not a member? Please sign up to gain complete access.

www.mathworksheets4kids.com

Counting to 20

Count the number of objects in each section, and circle the correct number.


1)



16

17


2)



9

10

3)



17


18

Gain complete access to the largest
collection of worksheets in all subjects!

Members, please
log in to
download this
worksheet.

Not a member?
Please sign up to
gain complete
access.

www.mathworksheets4kids.com



16

17

5)




7

8

9

10



12

13

14

15