



Name : \_\_\_\_\_

# Count and Compare



Sheet 1



1)   
How many  ? \_\_\_\_\_

  
How many  ? \_\_\_\_\_

Which of these are fewer?

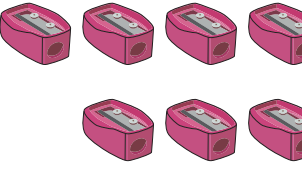

  



2)   
How many  ? \_\_\_\_\_

  
How many  ? \_\_\_\_\_

Which of these are fewer?



3)   
How many  ? \_\_\_\_\_

  
How many  ? \_\_\_\_\_

Which of these are fewer?





# PREVIEW



Gain complete access to the largest collection of worksheets in all subjects!

Members, please log in to download this worksheet.

Not a member? Please sign up to gain complete access.

[www.mathworksheets4kids.com](http://www.mathworksheets4kids.com)

4)   
How many  ? \_\_\_\_\_

  
How many  ? \_\_\_\_\_

Which of these are fewer?