


Name : \_\_\_\_\_

# Count and Compare

Sheet 2

1)



How many  ? \_\_\_\_\_

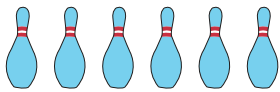



How many  ? \_\_\_\_\_

Which of these are fewer?



2)



How many  ? \_\_\_\_\_

Which of these are fewer?



# PREVIEW

Gain complete access to the largest collection of worksheets in all subjects!

Members, please log in to download this worksheet.

Not a member? Please sign up to gain complete access.

[www.mathworksheets4kids.com](http://www.mathworksheets4kids.com)

3)

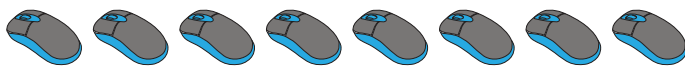


How many  ? \_\_\_\_\_

Which of these are fewer?



4)



How many  ? \_\_\_\_\_

Which of these are more?





How many  ? \_\_\_\_\_





# Count and Compare

1)



How many  ? 14

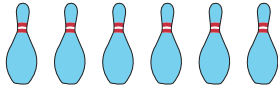



How many  ? 17

Which of these are fewer?



2)



How many  ?

Which of these are fewer?

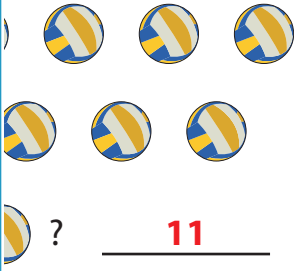
## PREVIEW


Gain complete access to the largest collection of worksheets in all subjects!

Members, please log in to download this worksheet.


Not a member? Please sign up to gain complete access.

[www.mathworksheets4kids.com](http://www.mathworksheets4kids.com)





How many  ? 11

Which of these are fewer?


 


3)




How many  ?

Which of these are fewer?

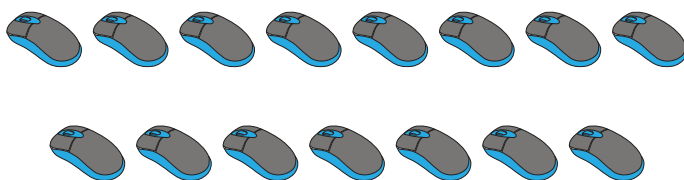



How many  ? 12


Which of these are fewer?


 

4)



How many  ? 15



How many  ? 19

Which of these are more?

