

Name : \_\_\_\_\_

# Counting to 20 - Double Ten Frames

Write how many counters are there.

1)

●	●	●	●	●	●	●	●		
●	●	●	●	●	●	●	●		

\_\_\_\_\_

2)

●	●	●	●	●	●				
●	●	●							

\_\_\_\_\_

3)

●	●	●			
●	●	●			

\_\_\_\_\_

4)

●	●	●			
●	●	●			

\_\_\_\_\_

5)

●	●	●							
●	●	●	●	●	●	●			

\_\_\_\_\_

6)

●	●	●	●	●	●				
●	●	●	●	●	●				

\_\_\_\_\_

**PREVIEW**

Gain complete access to the largest collection of worksheets in all subjects!

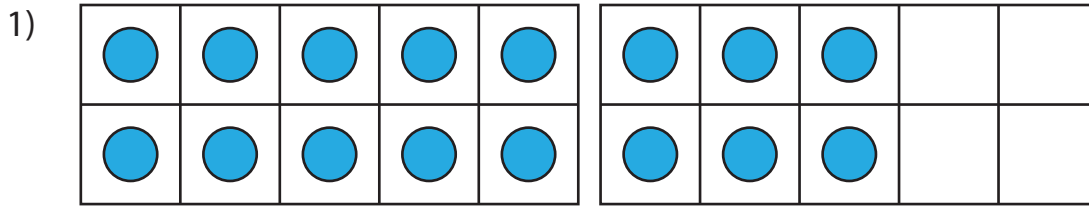
Members, please log in to download this worksheet.

Not a member? Please sign up to gain complete access.

[www.mathworksheets4kids.com](http://www.mathworksheets4kids.com)


# Counting to 20 - Double Ten Frames

Write how many counters are there.



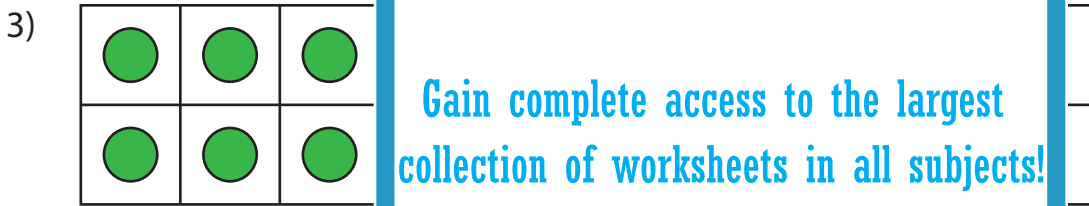

---

16




---

11



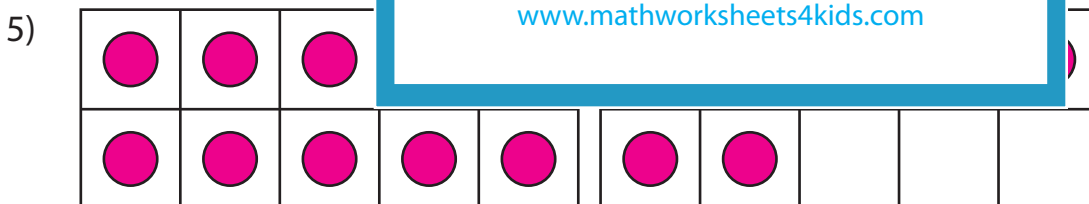

---

14



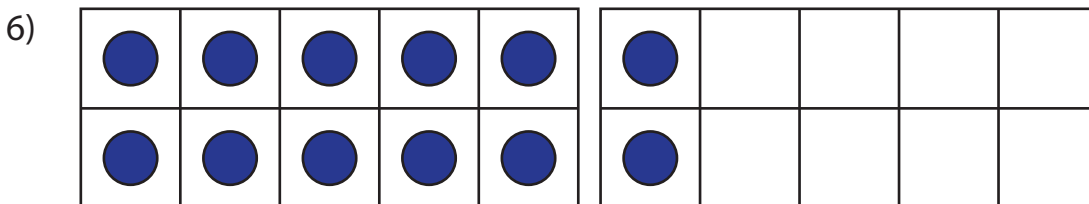

---

19




---

17




---

12

**PREVIEW**

Gain complete access to the largest collection of worksheets in all subjects!

Members, please log in to download this worksheet.

Not a member? Please sign up to gain complete access.

[www.mathworksheets4kids.com](http://www.mathworksheets4kids.com)