

Name : \_\_\_\_\_

# Counting to 20 - Double Ten Frames

Write how many counters are there.

1) 

●	●	●	●	●	●				
●	●	●	●	●					

\_\_\_\_\_

2) 

●	●	●	●	●	●	●	●	●	
●	●	●							

\_\_\_\_\_

3) 

●	●	●			
●	●	●			

\_\_\_\_\_

4) 

●	●	●		
●	●	●		

\_\_\_\_\_

5) 

●	●	●							
●	●	●	●	●	●				

\_\_\_\_\_

6) 

●	●	●	●	●	●	●	●	●	●
●	●	●	●	●	●	●			

\_\_\_\_\_

**PREVIEW**

Gain complete access to the largest collection of worksheets in all subjects!

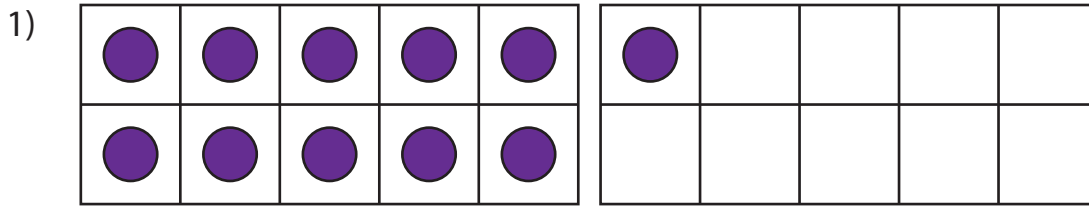
Members, please log in to download this worksheet.

Not a member? Please sign up to gain complete access.

[www.mathworksheets4kids.com](http://www.mathworksheets4kids.com)

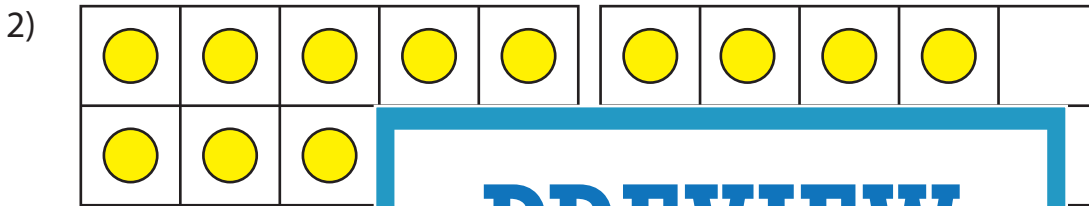
# Counting to 20 - Double Ten Frames

Write how many counters are there.



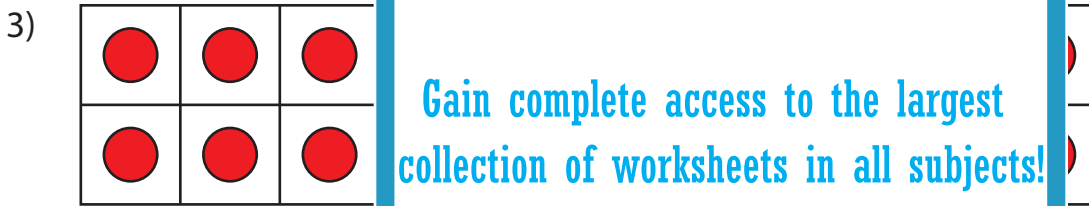

---

11




---

17



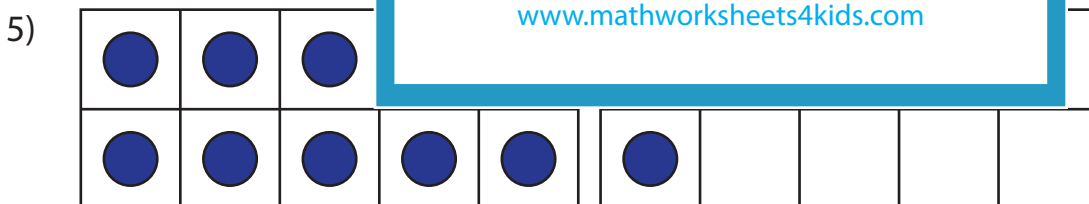

---

20



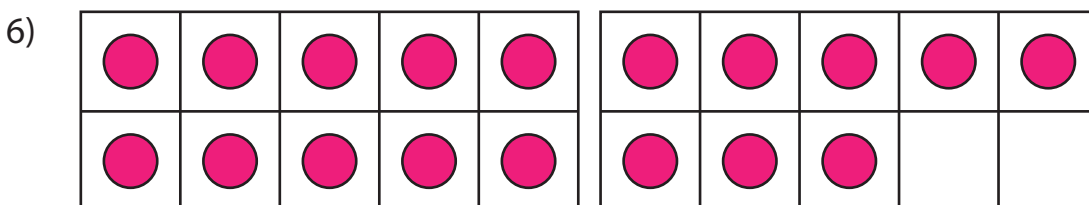

---

15




---

13




---

18

**PREVIEW**

Gain complete access to the largest collection of worksheets in all subjects!

Members, please log in to download this worksheet.

Not a member? Please sign up to gain complete access.

[www.mathworksheets4kids.com](http://www.mathworksheets4kids.com)