





Name : \_\_\_\_\_

## TRIP TO ZOO

Sheet 3

Mrs. Maria's class went on a field trip to the zoo. She asked the kids to vote for their favorite animal and recorded the results in a tally chart. Use the tally chart to answer the questions.

Animals	Tally Marks
 <p>Tiger</p>	
 <p>Giraffe</p>	
	
	

**PREVIEW**

Gain complete access to the largest collection of worksheets in all subjects!

Members, please log in to download this worksheet.

Not a member? Please sign up to gain complete access.

[www.mathworksheets4kids.com](http://www.mathworksheets4kids.com)

- 1) Which animal was most popular? \_\_\_\_\_
- 2) How many more votes did the tiger get than the giraffe? \_\_\_\_\_
- 3) Were there animals with equal votes?  
If yes, name the animals. \_\_\_\_\_
- 4) Which animal was most popular?  
\_\_\_\_\_
- 5) How many kids voted in all?  
\_\_\_\_\_