

Name : _____

Addition Sentence - Tenth

No regrouping: S1

Tens	Ones	Tenths

1) + =

_____ + _____ = _____

2) + =

_____ + _____ = _____

3) + =

_____ + _____ = _____

4) + =

_____ + _____ = _____

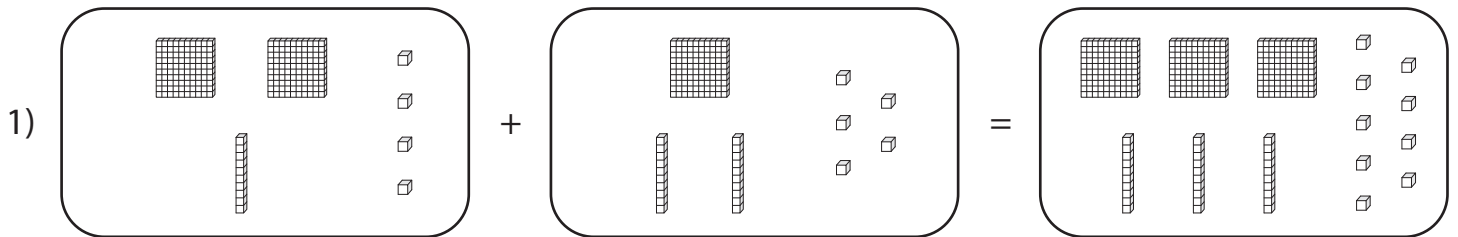
Name : _____

Answer key

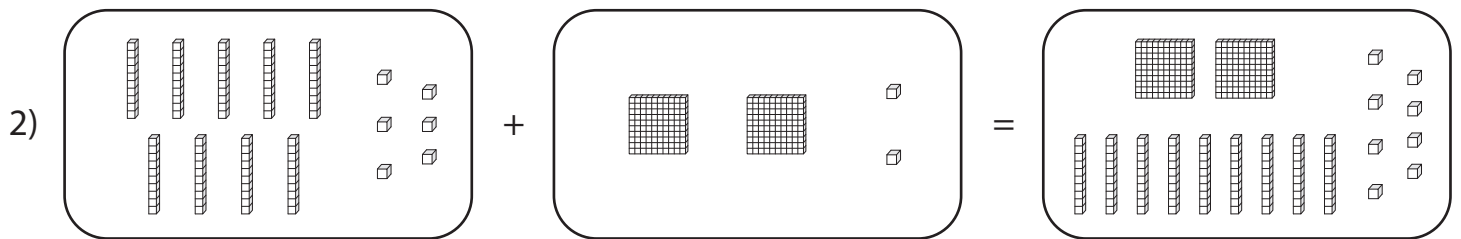
Addition Sentence - Tenths

No regrouping: S1

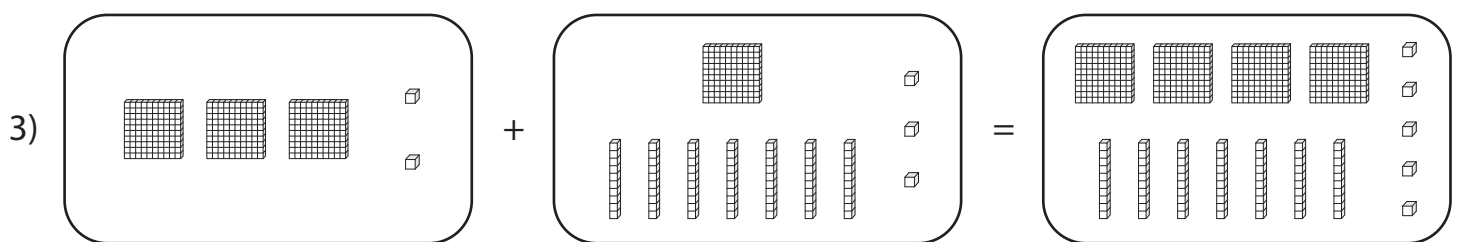
Tens	Ones	Tenths



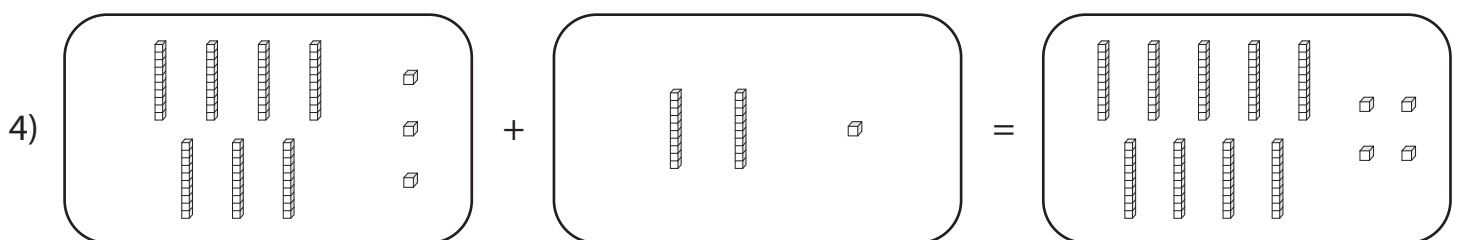
$$\underline{\quad 21.4 \quad} + \underline{\quad 12.5 \quad} = \underline{\quad 33.9 \quad}$$



$$\underline{\quad 9.6 \quad} + \underline{\quad 20.2 \quad} = \underline{\quad 29.8 \quad}$$



$$\underline{\quad 30.2 \quad} + \underline{\quad 17.3 \quad} = \underline{\quad 47.5 \quad}$$



$$\underline{\quad 7.3 \quad} + \underline{\quad 2.1 \quad} = \underline{\quad 9.4 \quad}$$