





Name : _____

Addition Sentence - Hundredths

Regrouping: S2

Tens	Ones	Tenths	Hundredths
			

1)

3 Tens (large cubes) + 1 One (flat square) = 3 Tens, 1 One, 3 Tenths (rods), 6 Hundredths (small cubes)

4 Ones (flat squares)

3 Tens (large cubes) + 5 Ones (flat squares) + 6 Tenths (rods) + 6 Hundredths (small cubes)

2)

1 One (flat square) + 6 Tenths (rods) + 4 Hundredths (small cubes)

2 Tens (large cubes) + 3 Ones (flat squares) + 5 Tenths (rods) + 6 Hundredths (small cubes)

3)

3 Ones (flat squares) + 6 Tenths (rods) + 4 Hundredths (small cubes)

+

1 Ten (large cube) + 3 Ones (flat squares) + 2 Tenths (rods) + 6 Hundredths (small cubes)

=

4 Tens (large cubes) + 6 Ones (flat squares) + 8 Tenths (rods) + 10 Hundredths (small cubes)

+

=

PREVIEW

Gain complete access to the largest collection of worksheets in all subjects!

Members, please log in to download this worksheet.

Not a member? Please sign up to gain complete access.





www.mathworksheets4kids.com

Name : _____

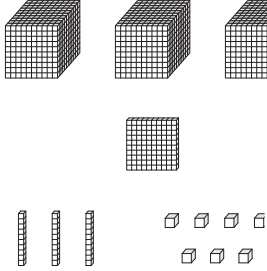
Answer key

Addition Sentence - Hundredths


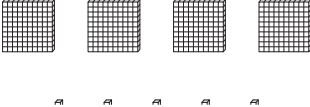
Regrouping: S2

Tens	Ones	Tenths	Hundredths
			

1)

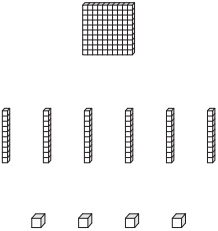


31.39




35.98

2)

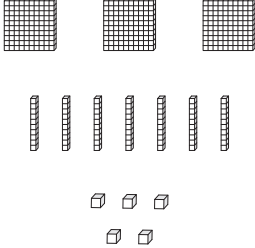


1.64



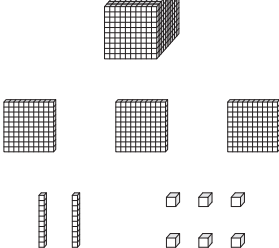
23.56

3)



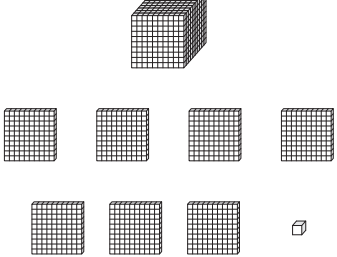
3.75

+



13.26

=



17.01

PREVIEW

Gain complete access to the largest collection of worksheets in all subjects!

Members, please log in to download this worksheet.

Not a member? Please sign up to gain complete access.

www.mathworksheets4kids.com