

Name : \_\_\_\_\_

# Addition Sentence - Tenth

Regrouping: S2

Tens	Ones	Tenths

1) + =

\_\_\_\_\_

2) + = \_\_\_\_\_

3) + = \_\_\_\_\_

4) + = \_\_\_\_\_

**PREVIEW**

Gain complete access to the largest collection of worksheets in all subjects!

Members, please log in to download this worksheet.

Not a member? Please sign up to gain complete access.

[www.mathworksheets4kids.com](http://www.mathworksheets4kids.com)

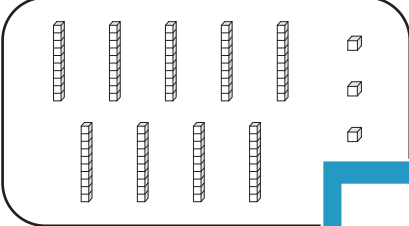
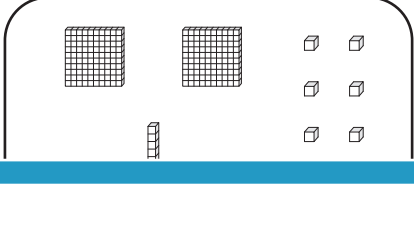
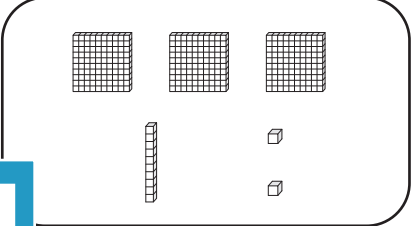
Name : \_\_\_\_\_

**Answer key**

**Addition Sentence - Tenths**

Regrouping: S2

Tens	Ones	Tenths

1)  +  = 

**9.4**

**31.2**

**PREVIEW**

Gain complete access to the largest collection of worksheets in all subjects!

Members, please log in to download this worksheet.

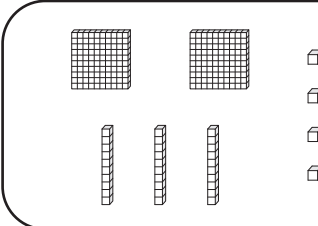
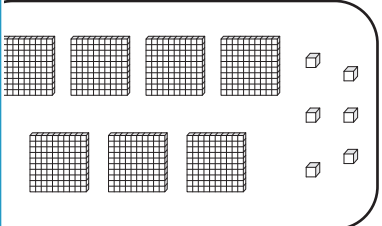
Not a member? Please sign up to gain complete access.

[www.mathworksheets4kids.com](http://www.mathworksheets4kids.com)

2)  + 

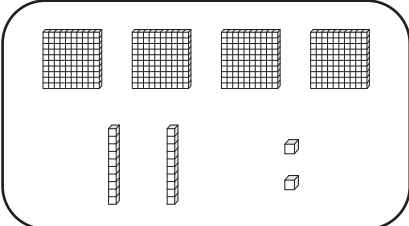
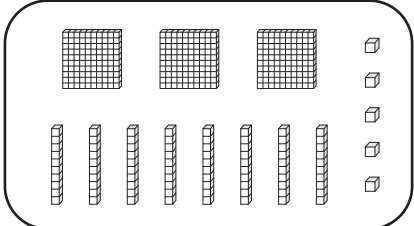
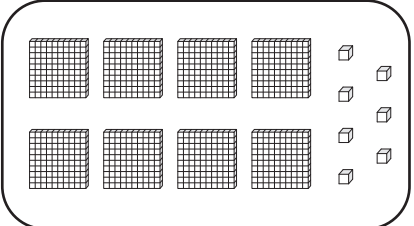
**15.3**

**23.9**

3)  + 

**23.7**

**70.6**

4)  +  = 

**42.2**

**38.5**

**80.7**