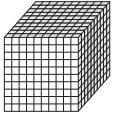
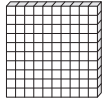


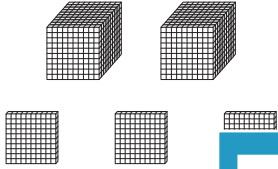
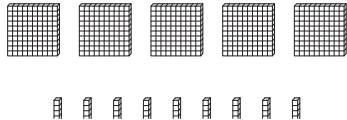


Name : \_\_\_\_\_

**MCQ**

Ones	Tenths	Hundredths	Thousandths
			

1)  +  =

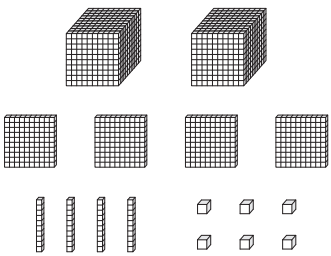
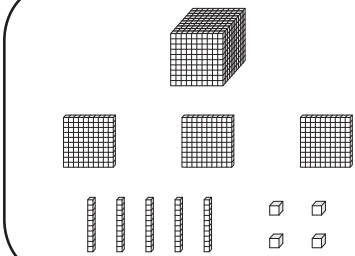
- a) 3.9
- b) 2.69
- c) 3.965
- d) 2.9

2)  =

- a) 2.6
- b) 1.65
- c) 2.56
- d) 1.965

3)  =

- a) 5.386
- b) 4.83
- c) 5.38
- d) 4.368

4)  +  =

- a) 3.7
- b) 2.865
- c) 3.8
- d) 2.68

**PREVIEW**

Gain complete access to the largest collection of worksheets in all subjects!

Members, please log in to download this worksheet.

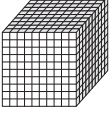



Not a member? Please sign up to gain complete access.

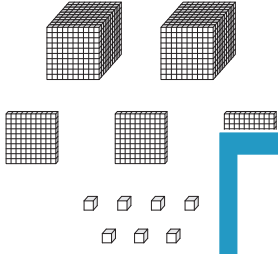
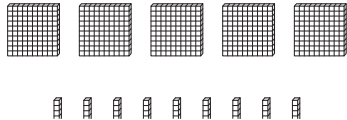
[www.mathworksheets4kids.com](http://www.mathworksheets4kids.com)

Name : \_\_\_\_\_

**Answer key**

**MCQ**

Ones	Tenths	Hundredths	Thousandths
			

1)  +  =

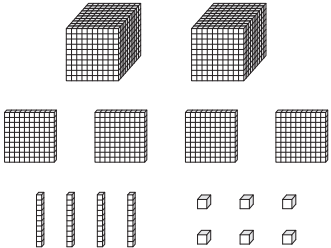
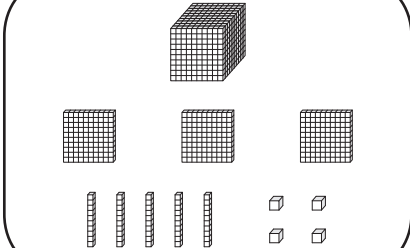
- a) 3.9
- b) 2.69
- c) 3.965
- d) 2.9

2)  +  =

- a) 2.6
- b) 1.65
- c) 2.56
- d) 1.965

3)  +  =

- a) 5.386
- b) 4.83
- c) 5.38
- d) 4.368

4)  +  =

- a) 3.7
- b) 2.865
- c) 3.8
- d) 2.68

**PREVIEW**

Gain complete access to the largest collection of worksheets in all subjects!

Members, please log in to download this worksheet.

Not a member? Please sign up to gain complete access.

[www.mathworksheets4kids.com](http://www.mathworksheets4kids.com)