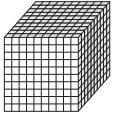
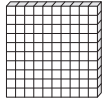


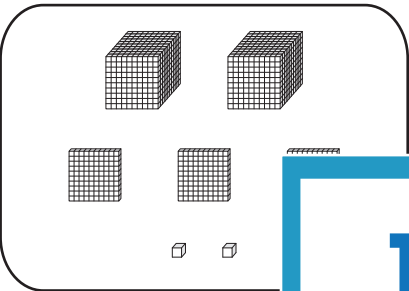



Name : _____

MCQ

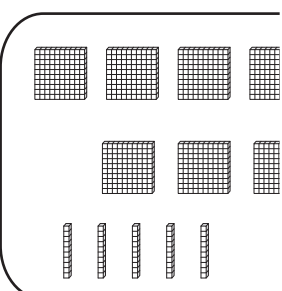

Ones	Tenths	Hundredths	Thousandths
			

1)  +  =

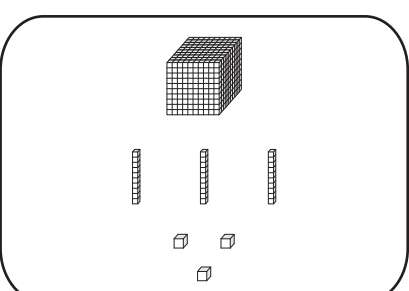
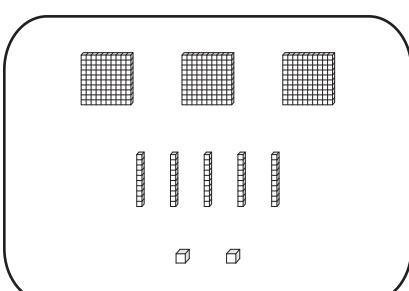
- a) 4.462
- b) 3.426
- c) 4.24
- d) 3.4

2)  +  =

- a) 5.765
- b) 4.8
- c) 4.67
- d) 5.7

3)  +  =

- a) 4.2
- b) 3.925
- c) 4.29
- d) 3.92

4)  +  =

- a) 1.385
- b) 2.8
- c) 1.835
- d) 2.38

PREVIEW

Gain complete access to the largest collection of worksheets in all subjects!

Members, please log in to download this worksheet.

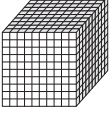



Not a member? Please sign up to gain complete access.


www.mathworksheets4kids.com

Name : _____

Answer key

MCQ

Ones	Tenths	Hundredths	Thousandths
			

1) 

a) 4.462

b) 3.426

c) 4.24

d) 3.4

2) 

a) 5.765

b) 4.8

c) 4.67

d) 5.7

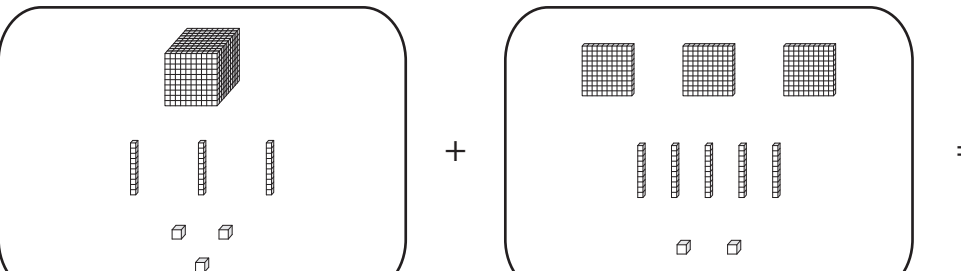
3) 

a) 4.2

b) 3.925

c) 4.29

d) 3.92

4) 

a) 1.385

b) 2.8

c) 1.835

d) 2.38

PREVIEW

Gain complete access to the largest collection of worksheets in all subjects!

Members, please log in to download this worksheet.

Not a member? Please sign up to gain complete access.

www.mathworksheets4kids.com