



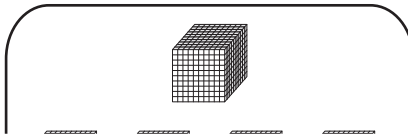
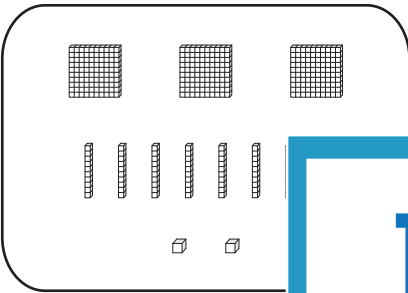
Name : \_\_\_\_\_

# Decimal Addition - Hundredths

Regrouping: S3

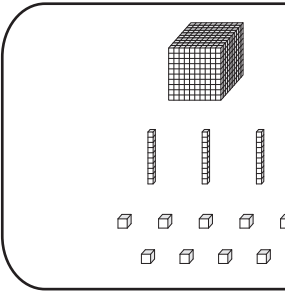
Tens	Ones	Tenths	Hundredths
			

1)



\_\_\_\_\_

2)



## PREVIEW

Gain complete access to the largest collection of worksheets in all subjects!

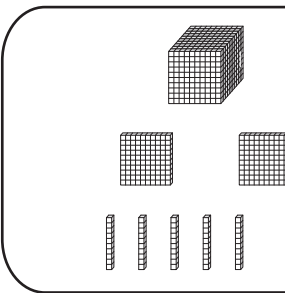
Members, please log in to download this worksheet.

Not a member? Please sign up to gain complete access.

[www.mathworksheets4kids.com](http://www.mathworksheets4kids.com)

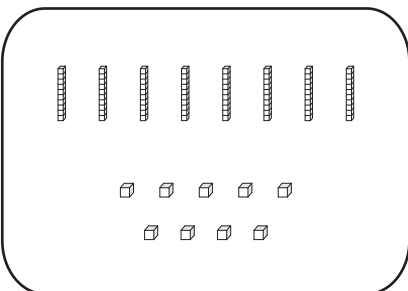
\_\_\_\_\_

3)

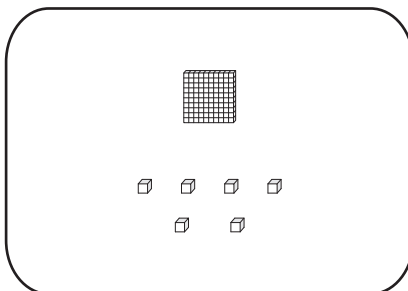


\_\_\_\_\_

4)



+



=




\_\_\_\_\_

Name : \_\_\_\_\_

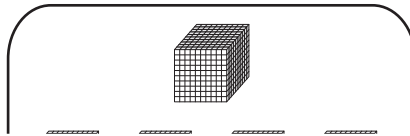
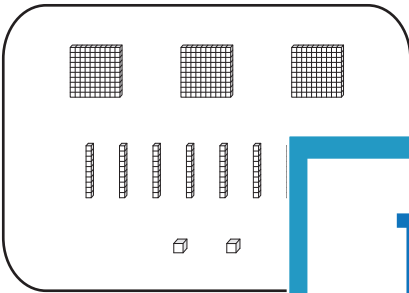
**Answer key**

# Decimal Addition - Hundredths

Regrouping: S3

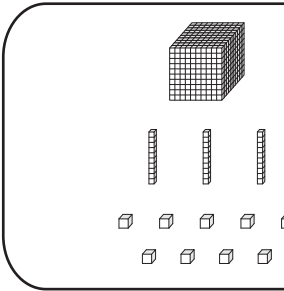
Tens	Ones	Tenths	Hundredths
			

1)



**18.29**

2)



Gain complete access to the largest collection of worksheets in all subjects!

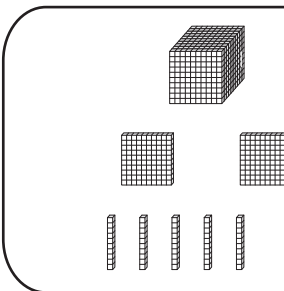
Members, please log in to download this worksheet.

Not a member? Please sign up to gain complete access.

[www.mathworksheets4kids.com](http://www.mathworksheets4kids.com)

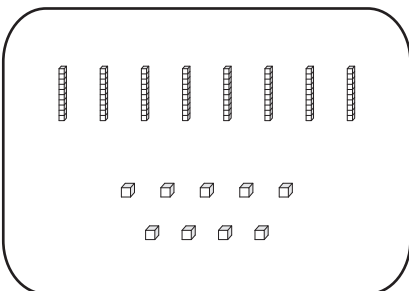
**23.64**

3)

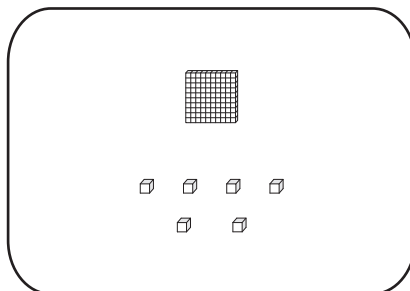


**37.8**

4)



+



=

**1.95**