


Name : \_\_\_\_\_

# Comparing Decimals - Blocks

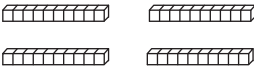
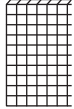
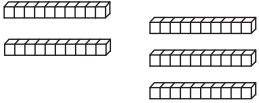
Sheet 2



Compare each pair of decimals using blocks.

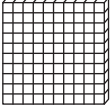
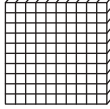

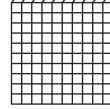


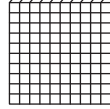


1)    

2)      

3)   

4)    

\_\_\_\_\_  \_\_\_\_\_

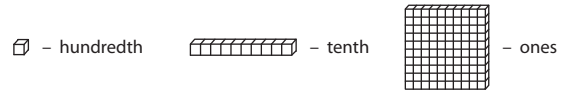
5)         

\_\_\_\_\_  \_\_\_\_\_


Name : \_\_\_\_\_

## Answer key

# Comparing Decimals - Blocks



Compare each pair of decimals using blocks.

1)    
 





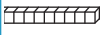



2)        


**0.05**  **0.5**

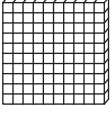

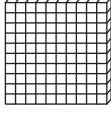



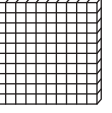

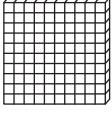

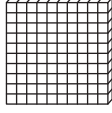

**3.6**  **3.36**


3)        

**1.8**  **1.8**

4)        

**0.13**  **0.31**

5)            

**4.2**  **2.4**

**PREVIEW**

Gain complete access to the largest collection of worksheets in all subjects!

Members, please log in to download this worksheet.

Not a member? Please sign up to gain complete access.

[www.mathworksheets4kids.com](http://www.mathworksheets4kids.com)