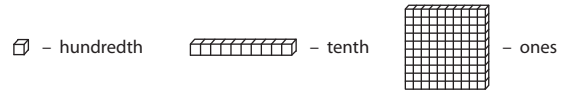


Name : _____

Comparing Decimals - Blocks

Sheet 4



Compare each pair of decimals using blocks.

1) _____

2) _____

3) _____

4) _____

5) _____

PREVIEW

Gain complete access to the largest collection of worksheets in all subjects!

Members, please log in to download this worksheet.

Not a member? Please sign up to gain complete access.

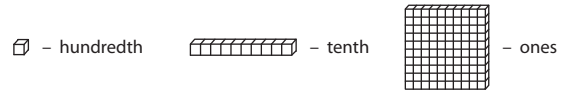
www.mathworksheets4kids.com

Name : _____

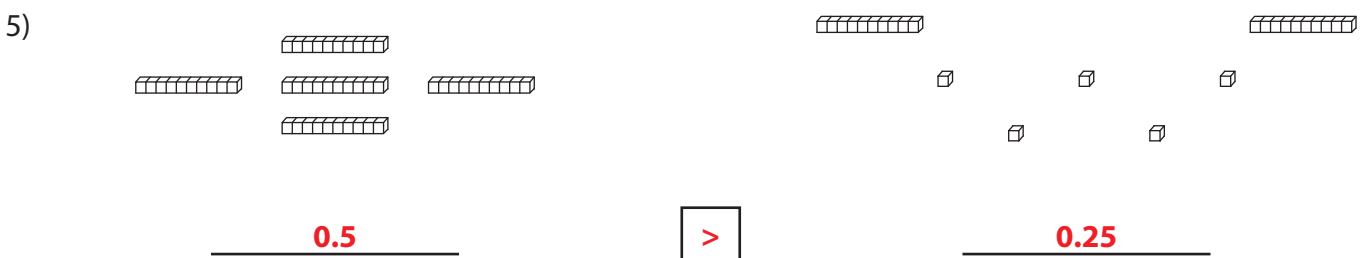
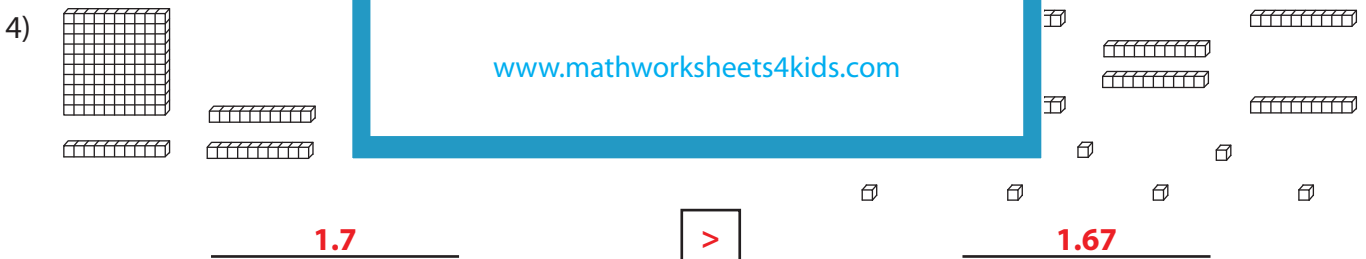
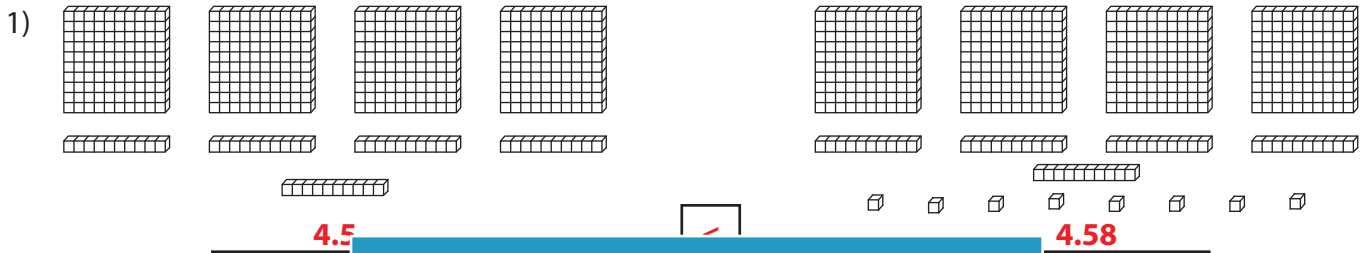
Answer key

Comparing Decimals - Blocks

Sheet 4



Compare each pair of decimals using blocks.



PREVIEW

Gain complete access to the largest collection of worksheets in all subjects!

Members, please log in to download this worksheet.

Not a member? Please sign up to gain complete access.

www.mathworksheets4kids.com