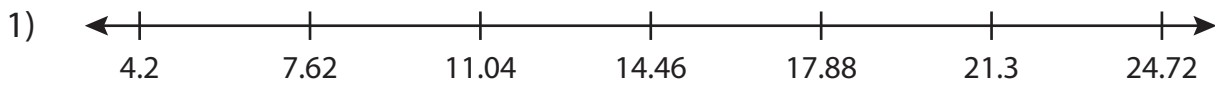


Name : _____

Comparing Decimals - Number Line

Sheet 3

Read the number line. Compare each pair of decimals using the symbols $>$, $<$ or $=$.



a) 21.39 21.29

b) 11.03 11.3

c) 16.7

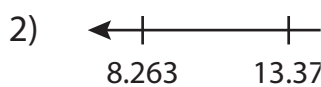
21.2

e) 14.36

4.25

g) 7.8

17.9



a) 29.552

38.904

c) 33.388 33.83

d) 35.5 35.5

e) 8.42 8.42

f) 13.256 13.526

g) 18.737 18.377

h) 28.698 28.6

PREVIEW

Gain complete access to the largest collection of worksheets in all subjects!

Members, please log in to download this worksheet.

Not a member? Please sign up to gain complete access.

www.mathworksheets4kids.com

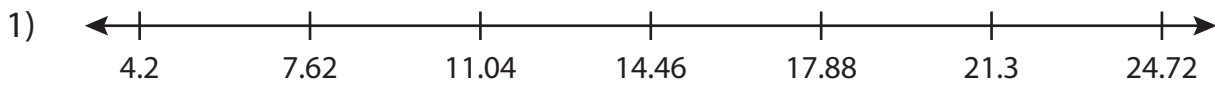
Name : _____

Answer key

Comparing Decimals - Number Line

Sheet 3

Read the number line. Compare each pair of decimals using the symbols $>$, $<$ or $=$.



a) 21.39 $>$ 21.29 b) 11.03 $<$ 11.3

c) 16.7 $<$ 21.2

e) 14.36 $<$ 4.25

g) 7.8 $<$ 17.9



a) 29.552 $<$ 38.904

c) 33.388 $<$ 33.83 d) 35.5 $=$ 35.5

e) 8.42 $=$ 8.42 f) 13.256 $<$ 13.526

g) 18.737 $>$ 18.377 h) 28.698 $>$ 28.6

PREVIEW

Gain complete access to the largest collection of worksheets in all subjects!

Members, please log in to download this worksheet.

Not a member? Please sign up to gain complete access.

www.mathworksheets4kids.com