

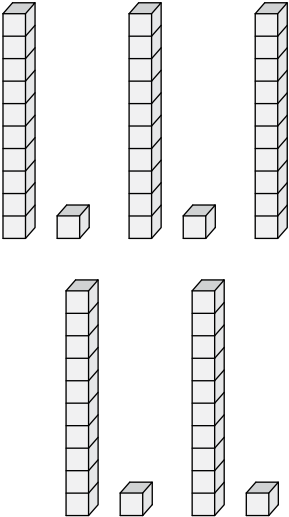
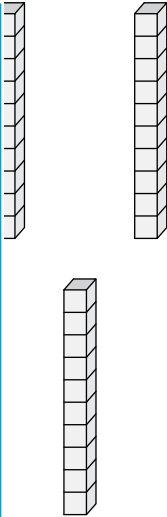
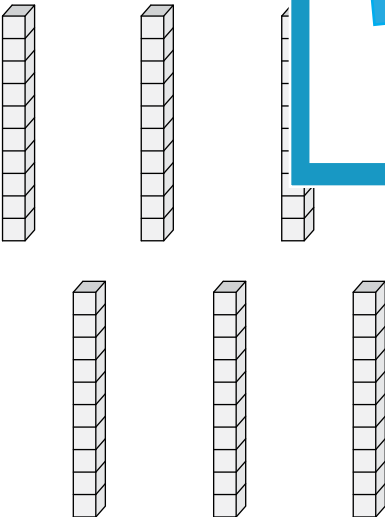
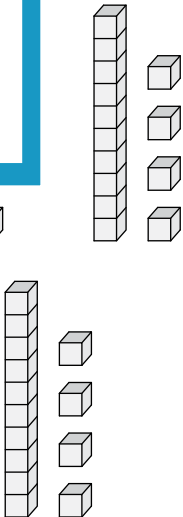


Name : _____

Dividing Decimals by Whole Numbers

Find the quotient using the visual models.

 <p>Tenths</p>	 <p>Hundredths</p>
---	---

<p>1)</p>  <p>$0.99 \div 9 = \underline{\hspace{2cm}}$</p>	<p>2)</p>  <p>$0.42 \div 3 = \underline{\hspace{2cm}}$</p>
<p>3)</p>  <p>$0.7 \div 7 = \underline{\hspace{2cm}}$</p>	 <p>$0.42 \div 3 = \underline{\hspace{2cm}}$</p>

PREVIEW

Gain complete access to the largest collection of worksheets in all subjects!



Members, please log in to download this worksheet.

Not a member? Please sign up to gain complete access.

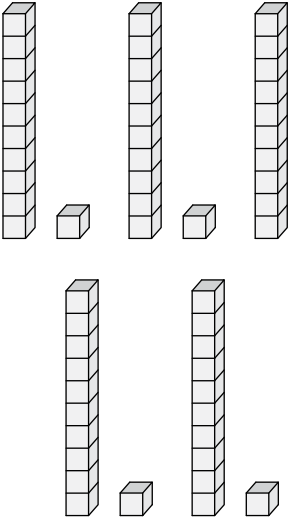
www.mathworksheets4kids.com

Dividing Decimals by Whole Numbers

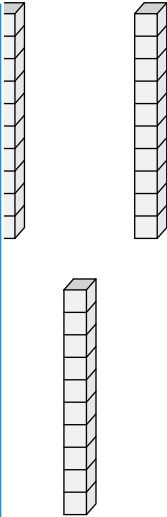
Find the quotient using the visual models.

 <p>Tenths</p>	 <p>Hundredths</p>
---	---

1)



$0.99 \div 9 = \underline{\hspace{2cm}}$



$\underline{\hspace{2cm}}$ **0.1**

PREVIEW

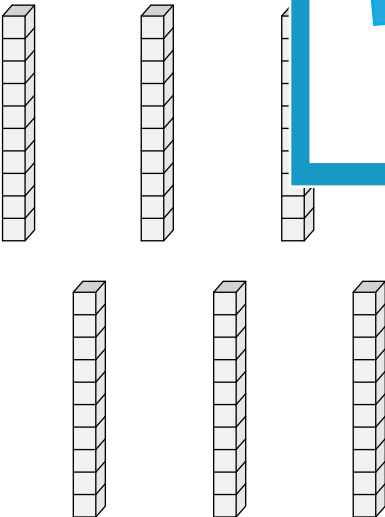
Gain complete access to the largest collection of worksheets in all subjects!

Members, please log in to download this worksheet.

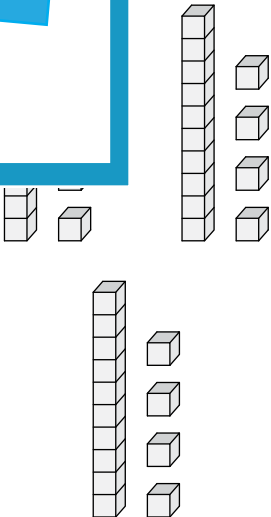
Not a member? Please sign up to gain complete access.

www.mathworksheets4kids.com

3)



$0.7 \div 7 = \underline{\hspace{2cm}}$ **0.1**



$0.42 \div 3 = \underline{\hspace{2cm}}$ **0.14**