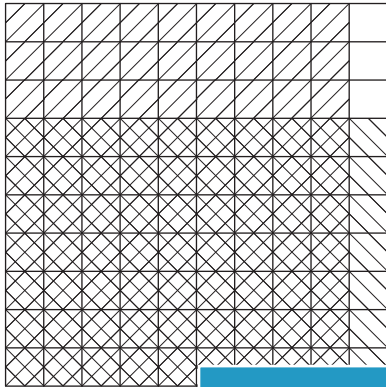


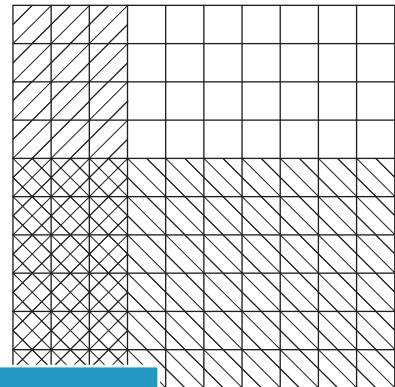
Multiplying Decimals

A) Find the product of the decimals using the grid.

1)



2)

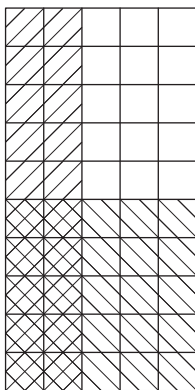


$0.9 \times 0.7 =$

PREVIEW

= _____

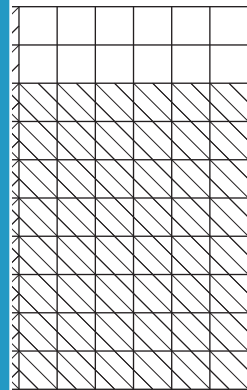
3)



Gain complete access to the largest collection of worksheets in all subjects!

Members, please log in to download this worksheet.

Not a member? Please sign up to gain complete access.




$0.2 \times 0.5 =$


= _____

B) Complete the mu


1)



×



=



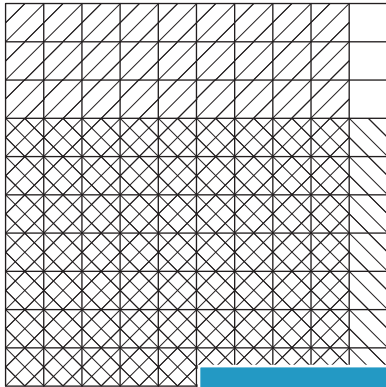
×

=

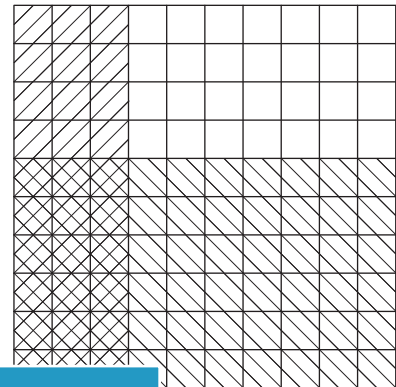
Multiplying Decimals

A) Find the product of the decimals using the grid.

1)



2)

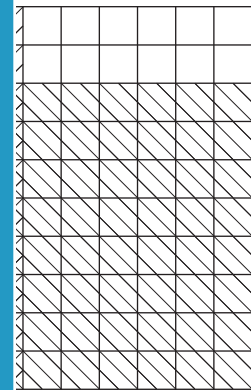
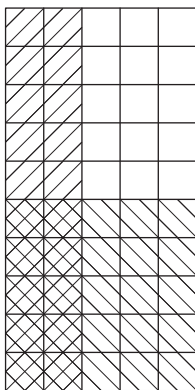


$0.9 \times 0.7 =$

PREVIEW

$= \underline{\hspace{2cm}} \mathbf{0.18}$

3)



$0.2 \times 0.5 =$

$= \underline{\hspace{2cm}} \mathbf{0.32}$

Gain complete access to the largest collection of worksheets in all subjects!


Members, please log in to download this worksheet.

Not a member? Please sign up to gain complete access.


www.mathworksheets4kids.com

B) Complete the mu


1)



×



=



$\underline{\hspace{2cm}} \mathbf{0.5}$

×

$\underline{\hspace{2cm}} \mathbf{0.1}$

=

$\underline{\hspace{2cm}} \mathbf{0.05}$