

Name : _____

Multiplying Decimals by Whole Numbers

Tenths: L2S1

A) Find the product.

$$\begin{array}{r} 1) \quad 45.8 \\ \times \quad 3 \\ \hline \end{array}$$

$$\begin{array}{r} 2) \quad 7.1 \\ \times \quad 15 \\ \hline \end{array}$$

$$\begin{array}{r} 3) \quad 9. \\ \times \quad 23 \\ \hline \end{array}$$

$$\begin{array}{r} 4.5 \\ \times \quad 23 \\ \hline \end{array}$$

$$\begin{array}{r} 5) \quad 8. \\ \times \quad 17 \\ \hline \end{array}$$

$$\begin{array}{r} 0.9 \\ \times \quad 7 \\ \hline \end{array}$$

PREVIEW

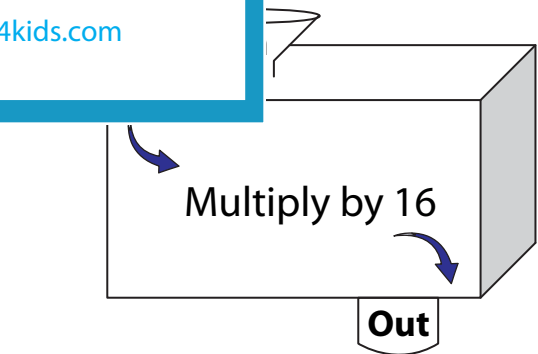
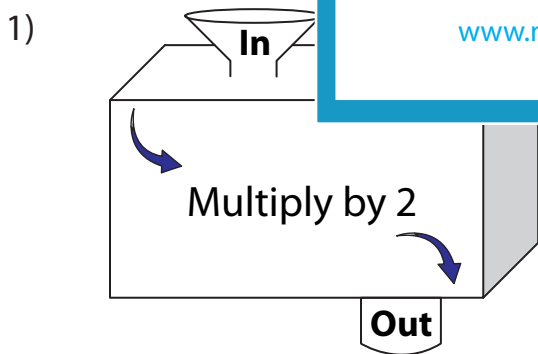
Gain complete access to the largest collection of worksheets in all subjects!

Members, please log in to download this worksheet.

Not a member? Please sign up to gain complete access.

www.mathworksheets4kids.com

B) Complete the in a



In	3.3	21.7
Out		

In	43.5	8.2
Out		

Name : _____

Multiplying Decimals by Whole Numbers

Tenths: L2S1

A) Find the product.

$$\begin{array}{r} 1) \quad 45.8 \\ \times \quad 3 \\ \hline 137.4 \end{array}$$

$$\begin{array}{r} 2) \quad 7.1 \\ \times \quad 15 \\ \hline 106.5 \end{array}$$

$$\begin{array}{r} 3) \quad 9.6 \\ \times \quad 5 \\ \hline 48.0 \end{array}$$

$$\begin{array}{r} 4.5 \\ \times 23 \\ \hline 103.5 \end{array}$$

$$\begin{array}{r} 5) \quad 8.7 \\ \times \quad 11 \\ \hline 95.7 \end{array}$$

$$\begin{array}{r} 0.9 \\ \times 7 \\ \hline 6.3 \end{array}$$

PREVIEW

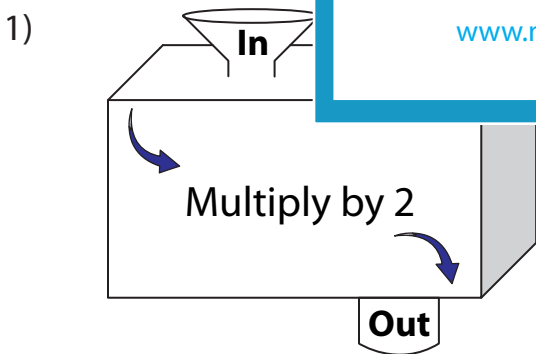
Gain complete access to the largest collection of worksheets in all subjects!

Members, please log in to download this worksheet.

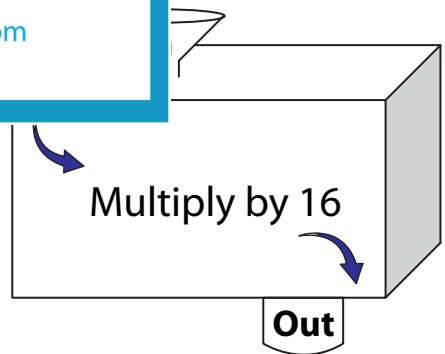
Not a member? Please sign up to gain complete access.

www.mathworksheets4kids.com

B) Complete the in a



In	3.3	21.7
Out	6.6	43.4



In	43.5	8.2
Out	696	131.2